



KELİME VE HECE SAYISI

☼ Aşağıda verilen cümleleri hecelerine ayırarak örnekteki gibi yazalım. Cümlelerin kelime ve hece sayılarını karşlarına yazalım.

CÜMLE	KELİME SAYISI	HECE SAYISI
Dayım gelince çok mutlu oldum. Da-yım ge-lin-ce çok mut-lu ol-dum.	5	10
Babam bugün bahçede çalıştı.
Azra asansörde kalmış.
Sokakta yaralı kuş bulduk.
Kuzenimle birlikte yüzdük.
Ergün koşarak okula girmiş.
Kutuları küçük odaya taşıdık
Balkona iki tane güvercin konmuş.
Oya ve Utku okula geç kalmış.
Öğretmen şiirimi çok beğendi.

TÜRKÇE

1. ETKİNLİK : Aşağıdaki cümlelerde boş bırakılan yerlere verilen kelimelerden uygun olanını yazalım.

At çok ot

Ege oldu.

Sıla git.

Bu çok büyük.


Topu ver .

Dün kişi geldi .

Onun Ömer.

Bebek içti.

eve	iki	yer	adı
süt	ebe	oda	ona



2. ETKİNLİK : Aşağıda karışık olarak verilen kelimelerle anlamlı bir cümle oluşturalım.

1. (kitap , Berra , okudu)

2. (oldu , hasta , İdris)


3. (gidecek , yarın , Mevlüde , köye)

4. (köfte , Yusuf , yedi)

5. (Yiğit , çıktı , ağaca , bahçedeki)

6. (sınıfta , Zeynep , söyledi , şarkı)

7. (parka , görmüşler , Melih'i , giderken)





23 NİSAN



Bugün Yirmi Üç Nisan,
Toplandı bütün vatan,
Millet Meclisimize
Atatürk oldu başkan




Kaldırdı hasta yurdu,
Yılmaz bir ordu kurdu,
Türk'ün şanlı sesini,
Dünyalara duyurdu.

Yükseldi bayrağımız,
Koparıldı bağımız,
Sultandan ayrılınca,
Kurtuldu toprağımız.

Türk çocuğu gül, sevin,
Yaşa yurdunda emin,
Bugünü an bayram et,
Bugün senindir, senin.



Vasfi Mahir Kocatürk



☆ Aşağıdaki soruları metne göre cevaplayalım.

1. Bütün vatan ne zaman toplanmış?

2. Millet Meclisine kim başkan olmuş?

3. Atatürk nasıl bir ordu kurmuş?


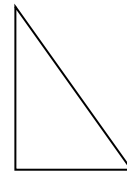


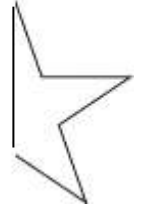
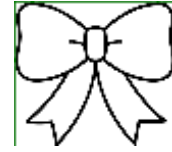
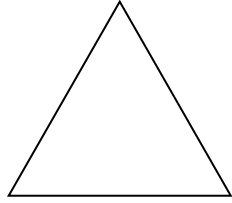

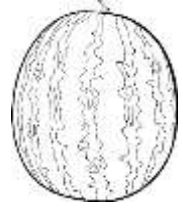
4. Atatürk dünyalara neyi duyurmuş?

5. Ne zaman toprağımız kurtulmuş?

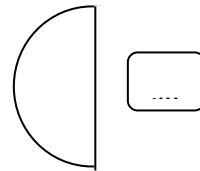
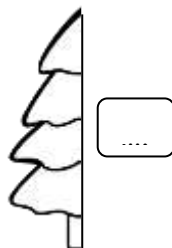
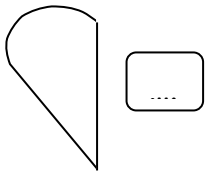
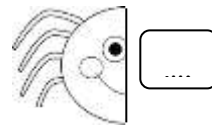


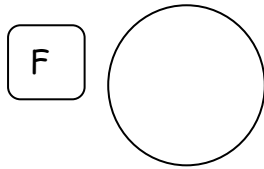

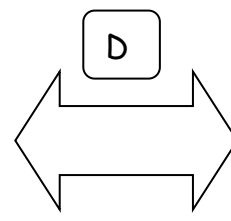
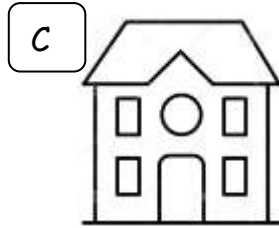
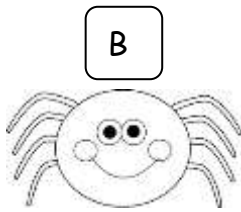
6. 23 Nisan günü kiminmiş?

BÜTÜN VE YARIM KAVRAMI

1.Etkinlik: Resimlerden bütün olanları boyayınız.

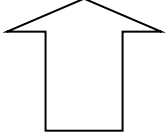

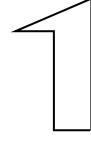
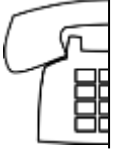



2.Etkinlik: Bütünlerle yarımlarını eşleştiriniz . Aynı renge boyayınız.

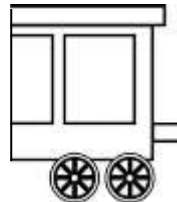

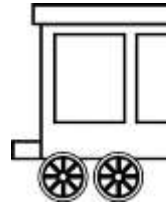


BÜTÜN VE YARIM KAVRAMI

1. Etkinlik: Resimlerden yarım olanları boyayınız.

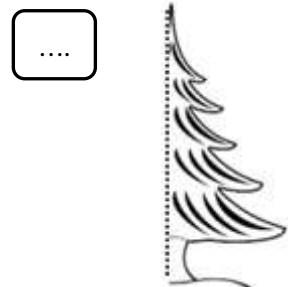



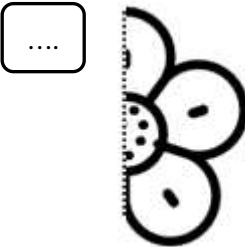
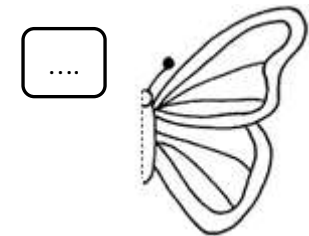
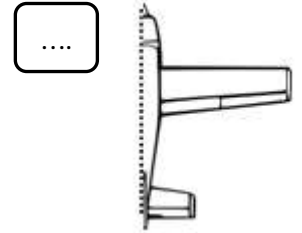
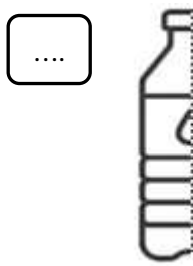
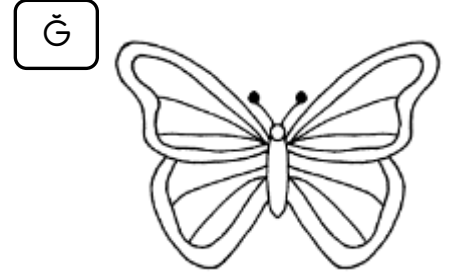
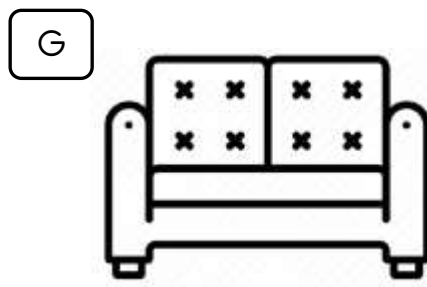

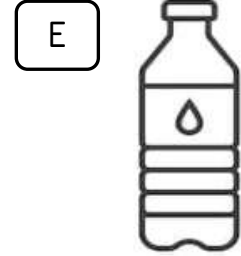
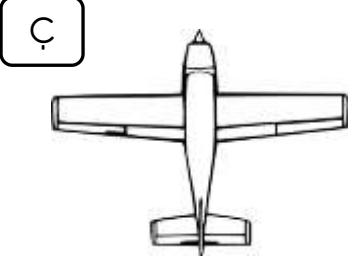




2. Etkinlik: Eş olan yarımaları aynı renge boyayınız.







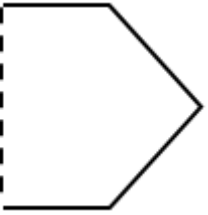
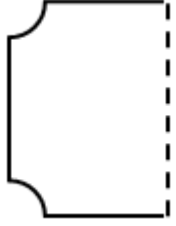
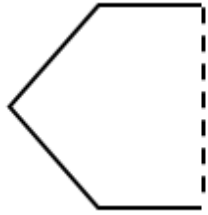
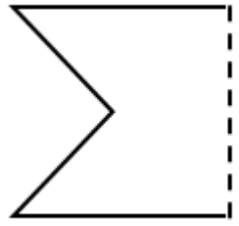
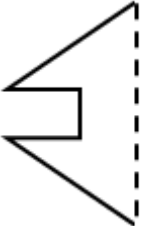


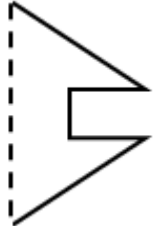
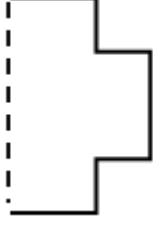
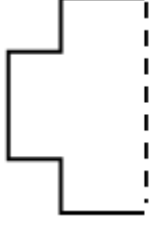

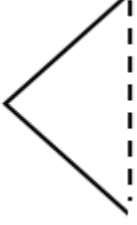
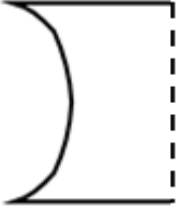

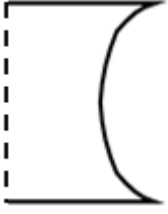

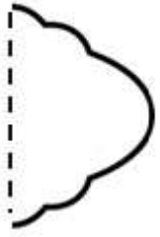



BÜTÜN VE YARIM KAVRAMI

☆ Bütünlere yarımalarını eşleştiriniz . Aynı renge boyayınız.



BÜTÜN VE YARIM KAVRAMI

☆ İlk sırada verilen yarımın eşini bulup boyayınız.



BÜTÜN VE YARIM

* Aşağıdaki noktalı yerleri örnekteki gibi dolduralım.



..... 1 bütün çilek , 2 yarım çilek eder.



..... domates , domates eder.



..... kivi , kivi eder.



..... elma , elma eder.



..... portakal , portakal eder.



2 tane bütün armut tane yarım armut eder.



3 tane bütün karpuz tane yarım karpuz eder.



4 tane bütün portakal tane yarım portakal eder.



2 tane bütün elma tane yarım elma eder.



3 tane bütün kivi tane yarım kivi eder.



BÜTÜN VE YARIM

* Aşağıdaki noktalı yerleri örnekteki gibi dolduralım.



..... 2 yarım çilek , 1 bütün çilek eder.



..... domates , domates eder.



..... kivi , kivi eder.



..... elma , elma eder.



..... portakal , portakal eder.



4 tane yarım karpuz tane bütün karpuz eder.



6 tane yarım çilek tane bütün çilek eder.



8 tane yarım kivi tane bütün kivi eder.



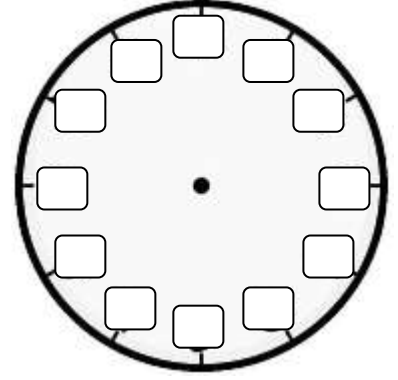
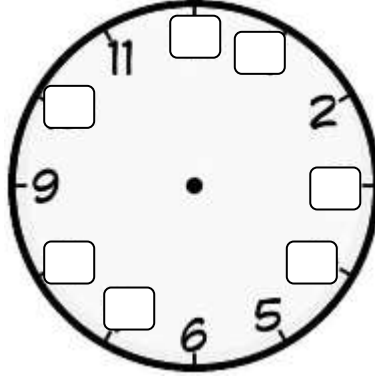
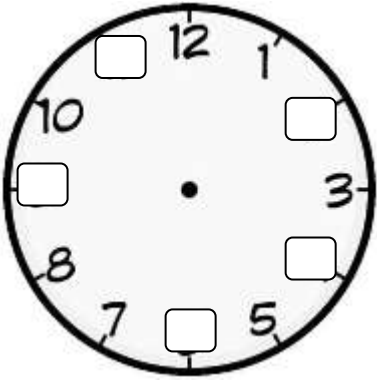
6 tane yarım domates tane bütün domates eder.



4 tane yarım portakal tane bütün portakal eder.

ZAMANI ÖLÇME

1.Etkinlik : Aşağıdaki saatte verilmeyen sayıları yazalım.



2.Etkinlik : Aşağıdaki saatlerin gösterdiği zamanı okuyup altına yazalım.



.....



.....



.....



.....



.....



.....



.....



.....

3.Etkinlik : Verilen olaylarla uygun saatleri eşleyelim.

3. Sabah uyanma saati

1. Okula giriş saati

2. Öğle yemeği saati

5. Okuldan çıkış saati

6. Akşam yemeği saati

4. Yatıp uyuma saati

.....



.....



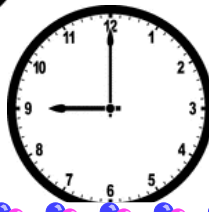
.....



.....



.....



.....





ZAMANI ÖLÇME

☆ Aşağıdaki saatlerin gösterdiği zamanı okuyup altına yazalım.



Saat 5



.....



.....



.....



.....



.....



.....



.....



.....



.....



.....



.....



ZAMANI ÖLÇME

☆ Aşağıdaki saatlerin gösterdiği zamanı okuyup altına yazalım.



Saat 4 buçuk

.....

.....



.....

.....

.....



.....

.....

.....



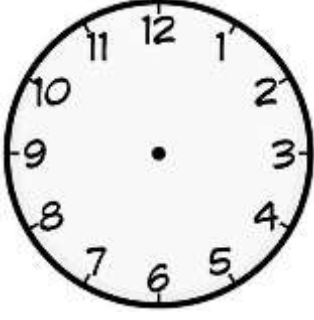
.....

.....

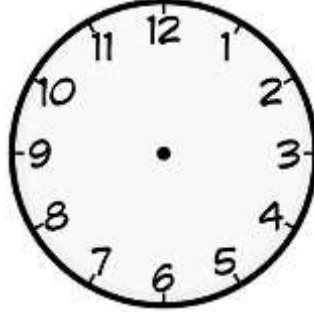
.....

ZAMANI ÖLÇME

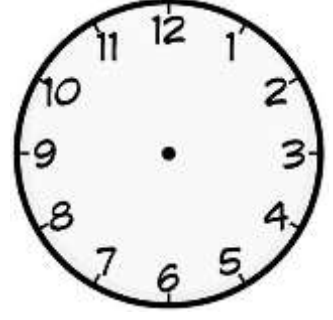
☆ Aşağıda verilen saatlerin verilen zamana uygun olarak akrep ve yelkovanlarını çizelim.



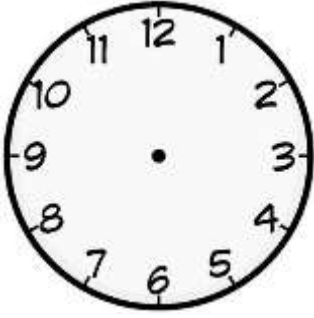
Saat 2



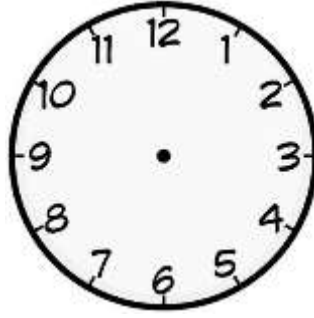
Saat 4



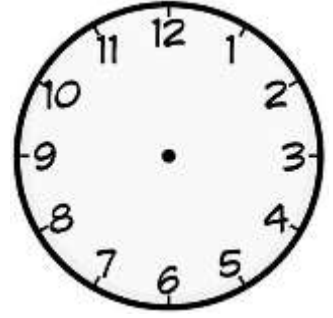
Saat 9



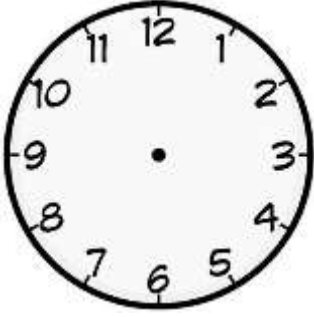
Saat 3



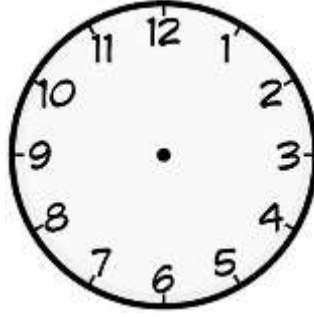
Saat 1 buçuk



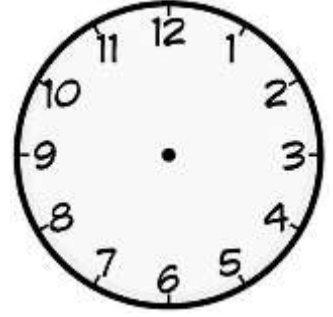
Saat 4 buçuk



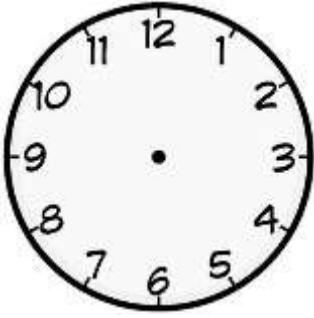
Saat 9 buçuk



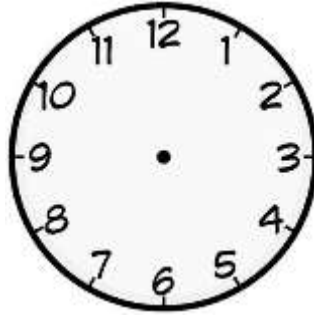
Saat 12 buçuk



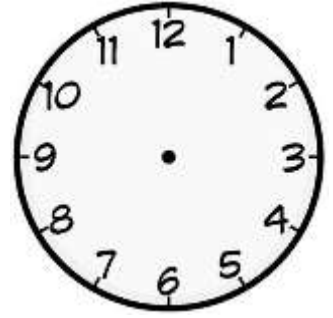
Saat 5 buçuk



Saat 7 buçuk



Saat 11



Saat 6