
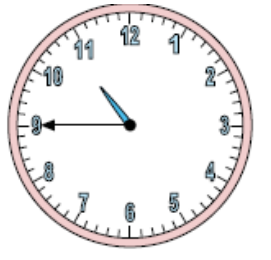








❖ Verilen **saatleri** istenen zaman dilimlerine göre **dönüştürünüz.**



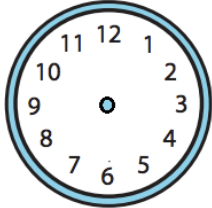

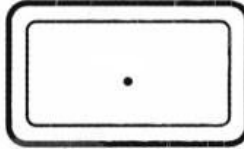
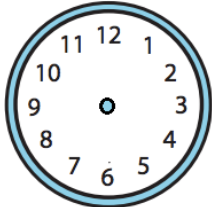
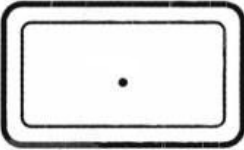
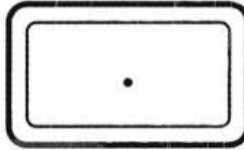
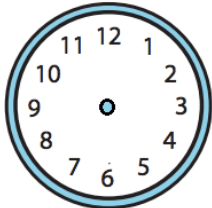


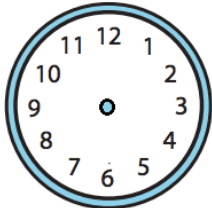
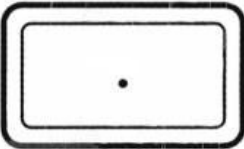
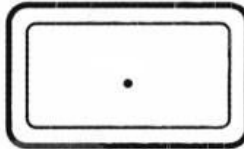
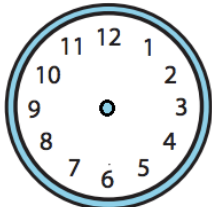
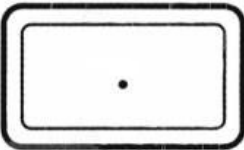
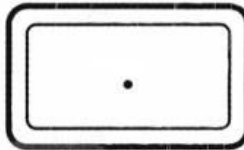
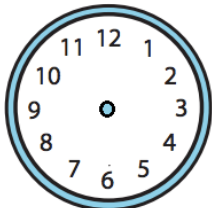


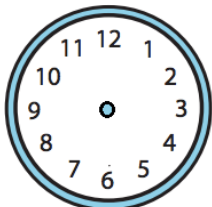
Öğleden Önce	→	Öğleden Sonra	→	Öğleden Sonra	→	Öğleden Önce
07.00	→		→	14.15	→	
10.30	→		→	19.45	→	
02.15	→		→	13.00	→	
09.45	→		→	16.30	→	
11.30	→		→	21.45	→	
05.00	→		→	18.30	→	
08.15	→		→	15.15	→	
01.45	→		→	17.45	→	
03.00	→		→	23.00	→	
06.30	→		→	20.30	→	

❖ Verilen **saatlerin** öğleden **önce** ve **sonraki** yazılışlarını yazınız.

				
Öğleden önce				
Öğleden sonra				

				
Öğleden önce				
Öğleden sonra				

❖ Verilen bilgiye göre boşlukları tamamlayıp, saati oluşturunuz.

Okunuşu	Öğleden Önce	Öğleden Sonra	Gösterilişi
Saat sekiz buçuk			
Saat ikiyi çeyrek geçiyor			
Saat tam on			
Saat beşe çeyrek var			
Saat on bir buçuk			
Saat yediyi çeyrek geçiyor			
Saat tam bir			
Saat dokuza çeyrek var	