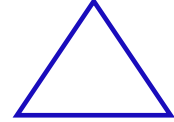
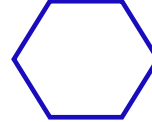

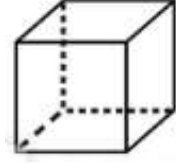
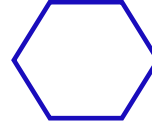

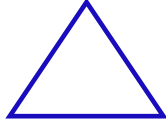

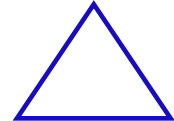

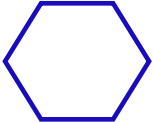
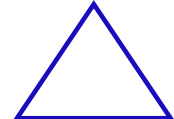

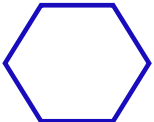

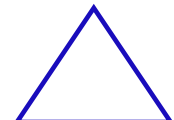

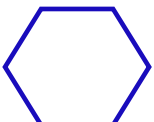
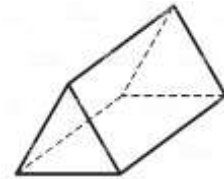




GEOMETRİK ŞEKİLLER



Belirtilen şekilde boyamaları yapalım.

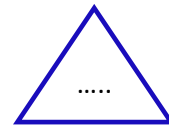

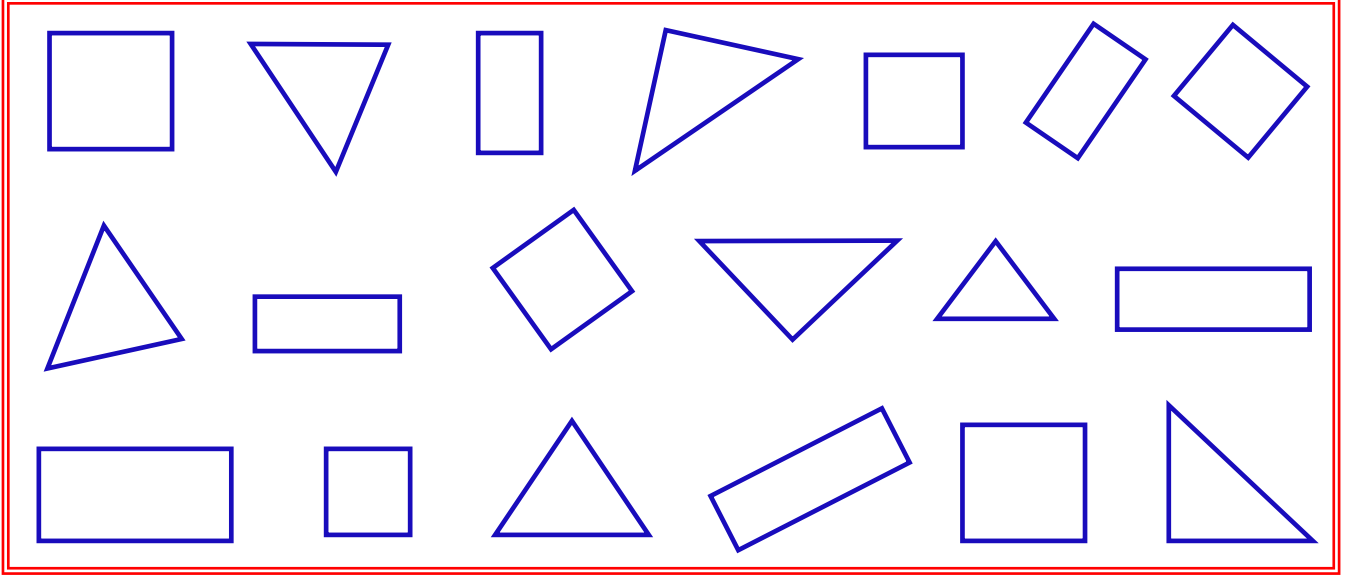
Yandaki geometrik cisimle hangi şekli çizebiliriz?
Şekli boyayalım.Yandaki geometrik cisimle hangi şekilleri çizebiliriz?
Şekilleri boyayalım.Yandaki geometrik cisimle hangi şekli çizebiliriz?
Şekli boyayalım.Yandaki geometrik cisimle hangi şekli çizebiliriz?
Şekli boyayalım.Yandaki geometrik cisimle hangi şekilleri çizebiliriz?
Şekilleri boyayalım.



GEOMETRİK ŞEKİLLER



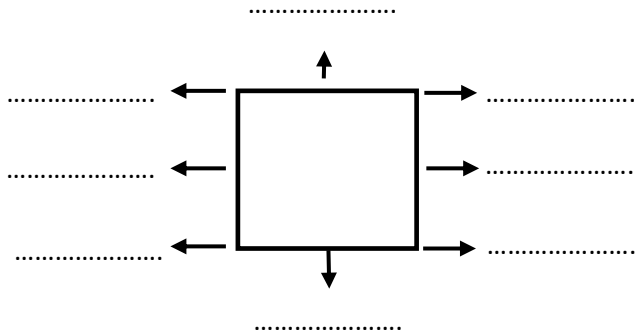
Aşağıda kare , dikdörtgen ve üçgenden kaç tane olduğunu bulalım. Sayıları ilgili şekillerdeki noktalı yerlere yazalım.



Aşağıdaki geometrik şekillerde ok işaretiyle gösterilen yerlerin isimlerini yazalım. İstenilen bilgileri yazalım.

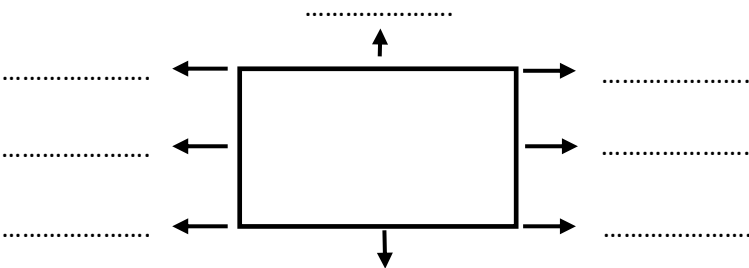
Kenar Sayısı :

Köşe Sayısı :



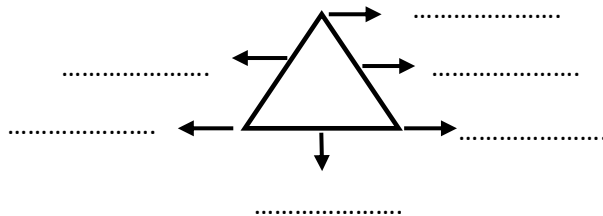
Kenar Sayısı :

Köşe Sayısı :



Kenar Sayısı :

Köşe Sayısı :






GEOMETRİK ŞEKİLLER




Aşağıda verilen noktaları birleştirerek geometrik şekilleri çizin. Çizilen geometrik şeklin ismini altına yazınız.




.....




.....




.....



.....



.....



.....



Aşağıdaki kenar uzunlukları verilmiş kareleri cetvel kullanarak çizelim.

4 cm



2 cm



Aşağıdaki kenar uzunlukları verilmiş dikdörtgenleri cetvel kullanarak çizelim.

Kısa kenar: 2 cm Uzun kenar: 4 cm



Kısa kenar: 3 cm Uzun kenar: 5 cm






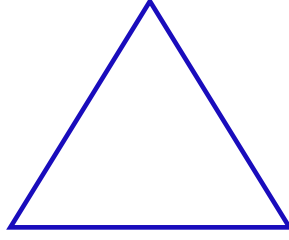
GEOMETRİK ŞEKİLLER




Aşağıdaki verilen geometrik şekillerin köşegenlerini çizin. Köşegen sayılarını yazalım.



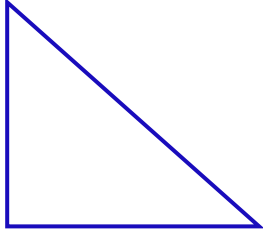
Köşegen sayısı:



Köşegen sayısı:



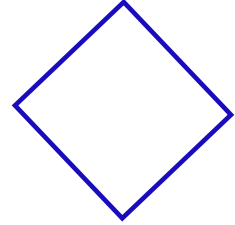
Köşegen sayısı:



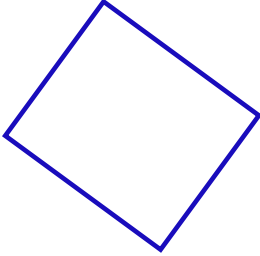
Köşegen sayısı:




Köşegen sayısı:



Köşegen sayısı:



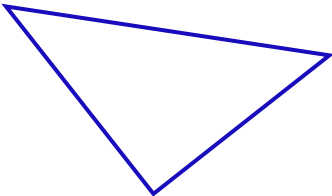
Köşegen sayısı:



Köşegen sayısı:




Köşegen sayısı:



Köşegen sayısı:



Köşegen sayısı:



Köşegen sayısı: