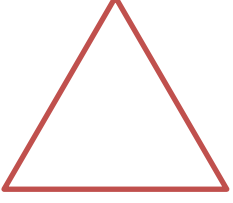


Adı :
Soyadı:

1 . Sınıf
Matematik

Geometrik Şekiller
Köşe-Kenar-1


Köşelerini gösteriniz. Kaç tane köşe var?




..... köşe




..... köşe



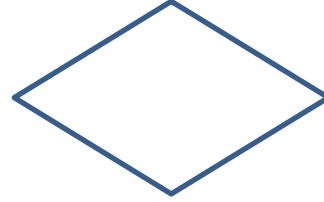
..... köşe



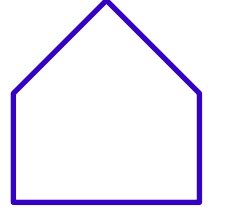
.... köşe



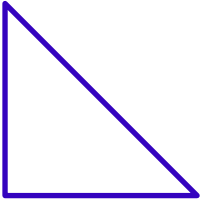
..... köşe



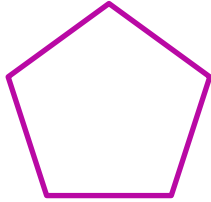
..... köşe




..... köşe




.... köşe




..... köşe




..... köşe




..... köşe




.... köşe



..... köşe



..... köşe



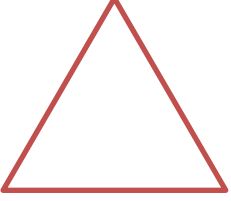
..... köşe

Adı :
Soyadı:

1 . Sınıf
Matematik

Geometrik Şekiller
Köşe-Kenar-1

Köşeleri göster. Köşeleri birleştir. Kenarları say.




3 kenar




..... kenar




..... kenar



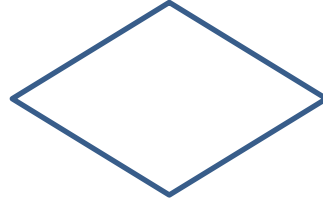
..... kenar



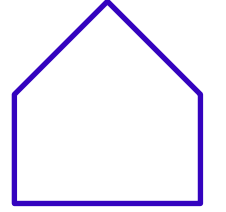
... kenar



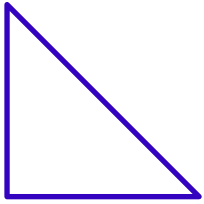
..... kenar



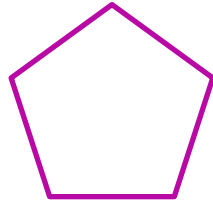
..... kenar




..... kenar




... kenar




..... kenar




..... kenar




..... kenar




... kenar



..... kenar



..... kenar



..... kenar