


Adı :
Soyadı:

1 . Sınıf
Matematik

Geometrik Şekiller
Köşe-Kenar-2


Köşelerini gösteriniz. Kaç tane köşe var?



Benim adım

.....tane kenarım vardır.


.....tane köşem vardır.



.....

.....


.....



.....

.....

.....



.....

.....

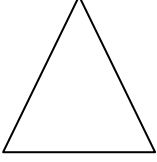

.....

Adı :
Soyadı:

1 . Sınıf
Matematik

Geometrik Şekiller
Köşe-Kenar-2


İsimlerini yazınız ve boyayınız.



.....



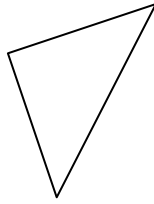
.....



.....




.....




.....




.....



.....




.....




.....



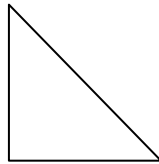
.....



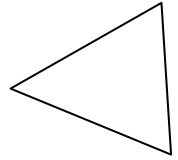
.....




.....



.....




.....



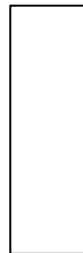
.....



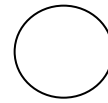
.....




.....



.....



.....



.....