

Adı :

Soyadı:

1 . Sınıf
Matematik

Uzunluk Ölçüleri-1

Kısa mı? Uzun mu?




U

K



U

K







Adı :

Soyadı:

1 . Sınıf
Matematik

Uzunluk Ölçüleri-1

En kısa olanı işaretleyelim. (✓)



En uzun olanı işaretleyelim. (✓)

