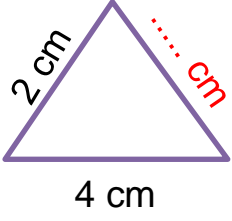


Adı :
Soyadı:

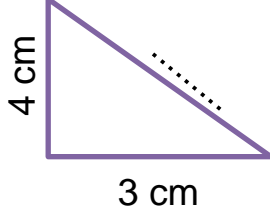
4. Sınıf
Matematik

Çevre Ölçme-2

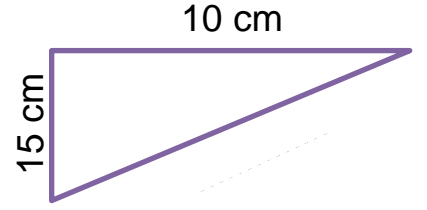
Aşağıdaki üçgenlerin verilmeyen kenarının uzunluğunu bulunuz.



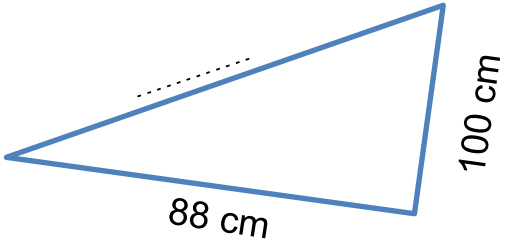
$\Ç = 8 \text{ cm}$
 $4 + 2 = 6 \text{ cm}$
 $8 - 6 = 2 \text{ cm}$



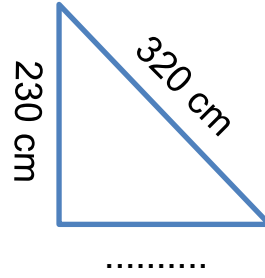
$\Ç = 12 \text{ cm}$
.....
.....



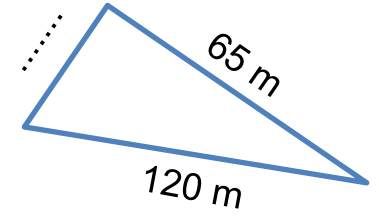
$\Ç = 45 \text{ cm}$
.....
.....



$\Ç = 324 \text{ cm}$
.....
.....



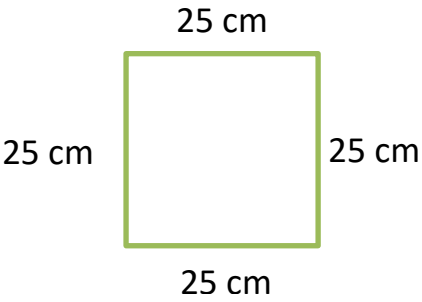
$\Ç = 750 \text{ cm}$
.....
.....



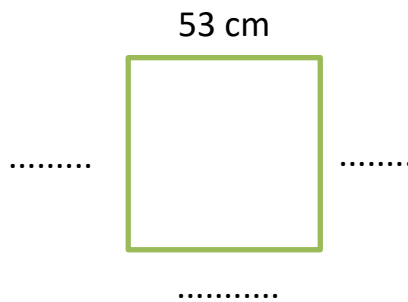
$\Ç = 280 \text{ m}$
.....
.....

Aşağıdaki karelerin çevrelerini hesaplayınız.

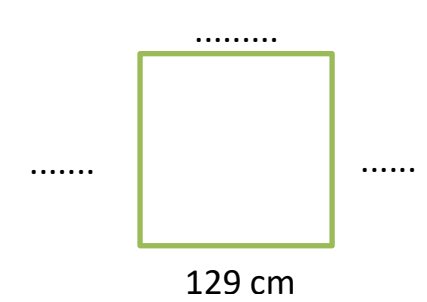
Hatırlayalım: Karelerin bütün kenarları eşittir.



$\Ç =$
 $\Ç =$
 $\Ç =$



.....
.....
.....



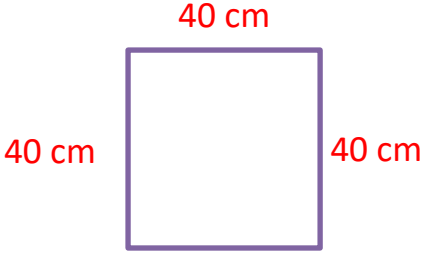
.....
.....
.....

Adı :
Soyadı:


4. Sınıf
Matematik

Çevre Ölçme-2


Aşağıdaki karelerin verilmeyen kenarının uzunluğunu bulunuz.




$$\begin{aligned} \text{Ç} &= 160 \text{ cm} \\ \text{K} &= 160 \div 4 \\ \text{K} &= \mathbf{40 \text{ cm}} \end{aligned}$$



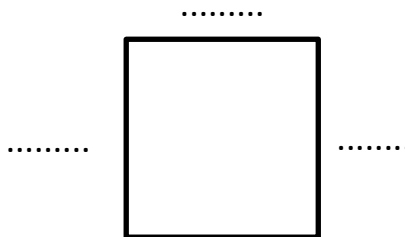
$$\begin{aligned} \text{Ç} &= 280 \text{ cm.} \\ \text{K} &= \\ \text{K} &= \end{aligned}$$




$$\begin{aligned} \text{Ç} &= 480 \text{ cm} \\ \text{K} &= \\ \text{K} &= \end{aligned}$$



$$\begin{aligned} \text{Ç} &= 880 \text{ m} \\ \text{K} &= \\ \text{K} &= \end{aligned}$$

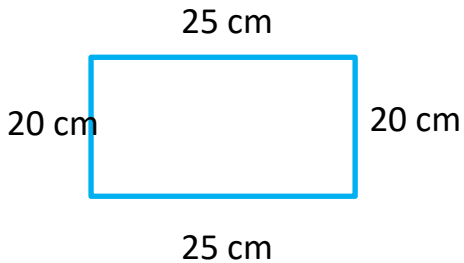


$$\begin{aligned} \text{Ç} &= 1248 \text{ m.} \\ \text{K} &= \\ \text{K} &= \end{aligned}$$



$$\begin{aligned} \text{Ç} &= 728 \text{ m} \\ \text{K} &= \\ \text{K} &= \end{aligned}$$

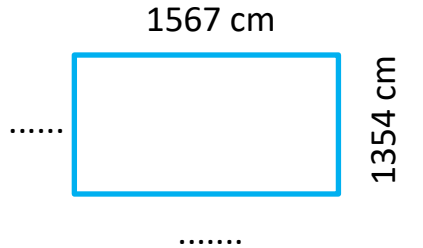
Aşağıdaki dikdörtgenlerin çevresini hesaplayınız.



$$\begin{aligned} \text{Ç} &= 20 + 20 + 25 + 25 \\ \text{Ç} &= 90 \text{ cm} \end{aligned}$$



$$\begin{aligned} &..... \\ &..... \end{aligned}$$



$$\begin{aligned} &..... \\ &..... \end{aligned}$$

Adı :

Soyadı:

4. Sınıf
Matematik

Çevre Ölçme-2

Aşağıdaki dikdörtgenlerin verilmeyen kenarının uzunluğunu bulunuz.

20 cm



.....

$$\begin{aligned}\Ç &= 70 \text{ cm} \\ \Ç &= 20 + 20 = 40 \\ \Ç &= 70 - 40 = 30 \\ \Ç &= 30 : 2 = 15\end{aligned}$$

35 cm



.....

$$\Ç = 130 \text{ cm}$$

.....

.....

.....

48 cm



.....

$$\Ç = 192 \text{ cm}$$

.....

.....

.....

.....



.....

$$\Ç = 540 \text{ cm}$$

.....

.....

.....

.....



100 m

$$\Ç = 300 \text{ m}$$

.....

.....

.....

350 cm



.....

$$\Ç = 1000 \text{ cm}$$

.....

.....

.....

.....



.....

$$\Ç = 540 \text{ m}$$

.....

.....

.....

.....



90 m

$$\Ç = 400 \text{ m}$$

.....

.....

.....

80 m



.....

$$\Ç = 260 \text{ m}$$

.....

.....

.....