


Adı : .....

Soyadı: .....

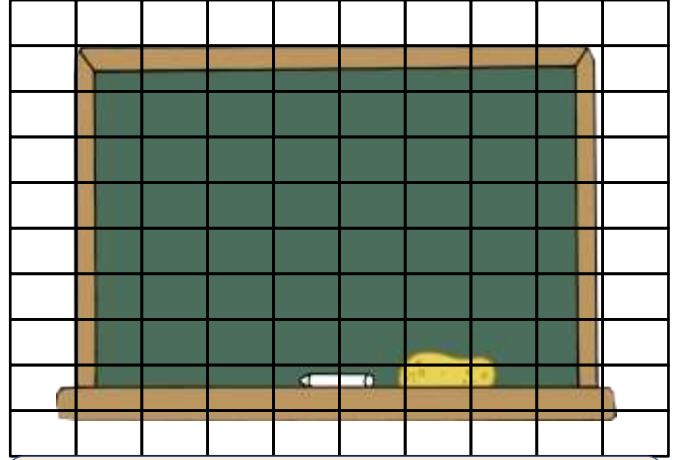
4. Sınıf  
Matematik

Alan Ölçme-1


Aşağıdaki görsellerin kaç tane birimkare kapladığını bulunuz.



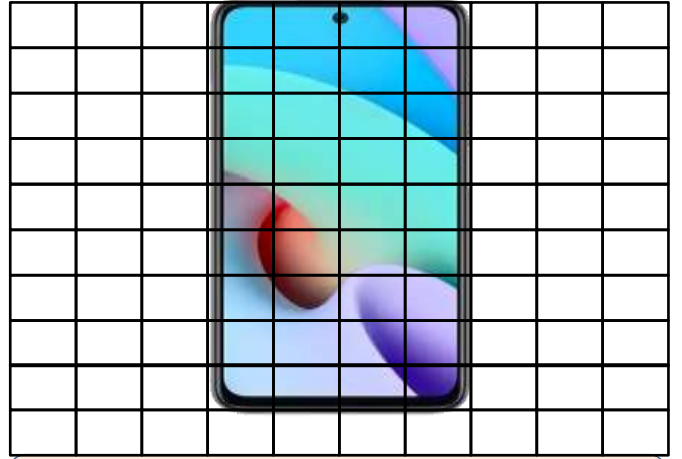
Satır Sayısı = ..... Sütun Sayısı = .....  
Alan = .....




Satır Sayısı = ..... Sütun Sayısı = .....  
Alan = .....



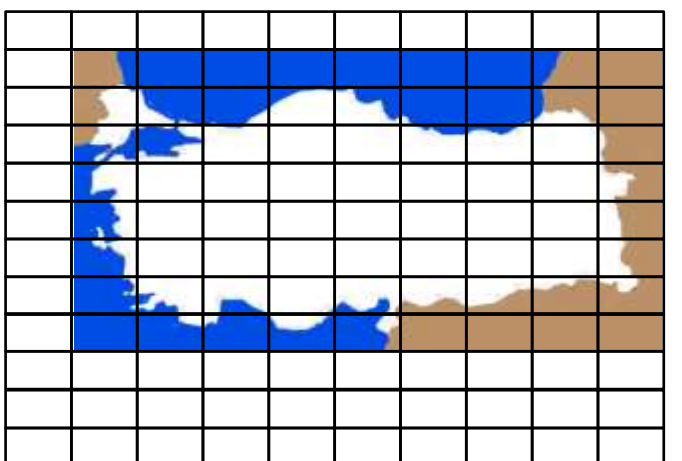
Satır Sayısı = ..... Sütun Sayısı = .....  
Alan = .....



Satır Sayısı = ..... Sütun Sayısı = .....  
Alan = .....



Satır Sayısı = ..... Sütun Sayısı = .....  
Alan = .....



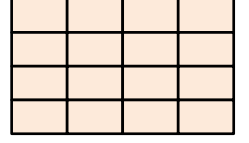
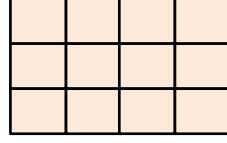


Satır Sayısı = ..... Sütun Sayısı = .....  
Alan = .....

Adı : .....  
Soyadı: .....

4. Sınıf  
Matematik

Alan Ölçme-1

Aşağıdaki boyalı alanların satır ve sütun sayısını yazarak alanını hesaplayınız.

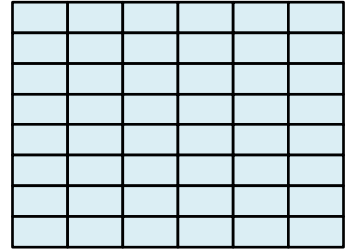
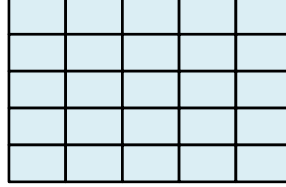
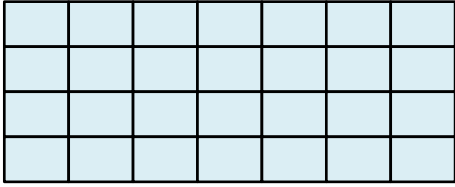


Satır Sayısı =.....  
Sütun Sayısı= .....  
Alanı=.....

Satır Sayısı =.....  
Sütun Sayısı= .....  
Alanı=.....

Satır Sayısı =.....  
Sütun Sayısı= .....  
Alanı=.....




Satır Sayısı  
=.....  
Sütun Sayısı= .....



.....  
.....  
.....

.....  
.....  
.....




.....  
.....  
.....



.....  
.....  
.....

.....  
.....  
.....

.....  
.....  
.....



.....  
.....  
.....

.....  
.....  
.....

.....  
.....  
.....