
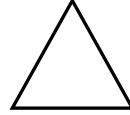


## GEOMETRİK ŞEKİLLER

1. Yanda verilmiş uzunlukları eşit olan 4 çubukla hangi şekli yapabiliriz?



2. Yandaki şeklin köşe ve kenar sayısı hangi seçenekte doğru verilmiştir ?



4 kenar  
4 köşe



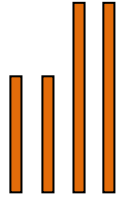

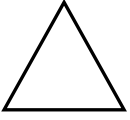
4 kenar  
6 köşe





3 kenar  
3 köşe



3. Yanda verilmiş çubuklarla hangi şekli yapabiliriz?



4. Yanda verilen şişe kapağı ile hangi şekli çizebiliriz?



5. Hangi harfin yazılı olduğu şeklin köşesi yoktur?



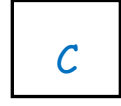
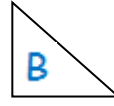

A



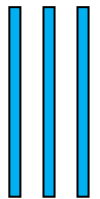
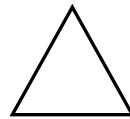

B



C



6. Yanda verilmiş çubuklarla hangi şekli yapabiliriz?



7. Aşağıdakilerden hangisinin köşe ve kenar sayısı diğerlerinden farklıdır ?

