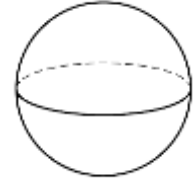
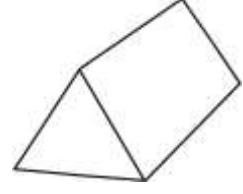
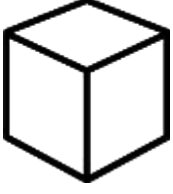


GEOMETRİK CİSİMLER

1. Etkinlik : Aşağıdaki geometrik cisimlerin adlarını tablodan bularak yazalım.

prizma - küre - prizma - silindir - prizma - küp - prizma



2. Etkinlik : Aşağıdaki resimler hangi geometrik cisimlere benzemektedir eşleyelim.



A



B




C



D



E



F



G



H



I



İ



J



K



L



M

.....