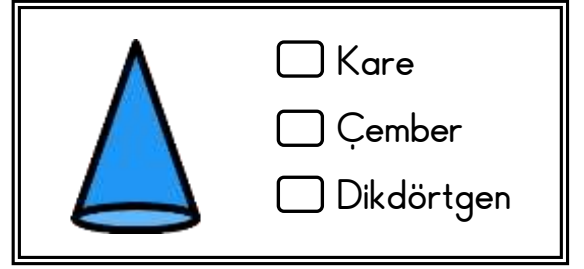
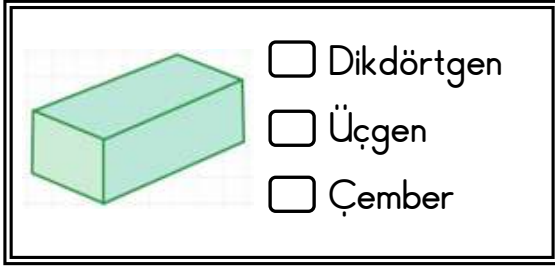
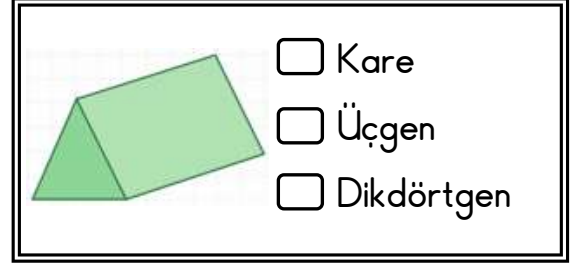
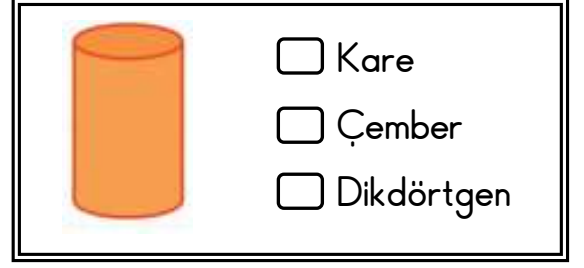
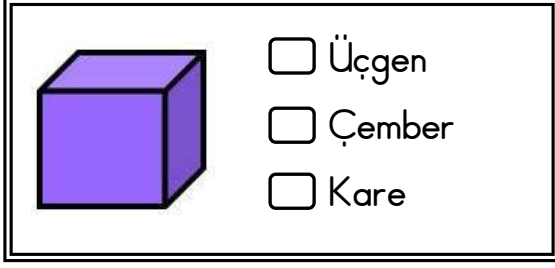


GEOMETRİK CİSİMLER

◆ Aşağıdaki geometrik cisimlerin yüzlerini oluşturan geometrik şekilleri işaretleyelim.



◆ Aşağıdaki verilen numaralı cisimleri özelliklerine göre ait oldukları kutuya numaralarını yazalım.



KÖŞESİ OLAN CİSİMLER

.....
.....

KÖŞESİZ CİSİMLER

.....
.....

YUVARLANABİLEN
CİSİMLER

.....
.....