


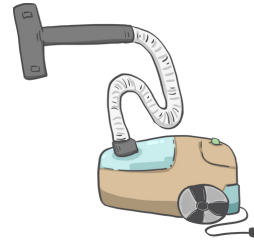
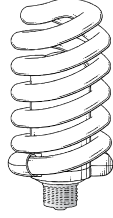


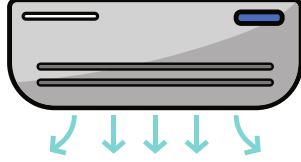


3. SINIF

FEN BİLİMLERİ DERSİ 30. HAFTA ÇALIŞMA KAĞIDI

- Aşağıda verilen araç gereçlerden elektrikle çalışanları işaretleyelim. Tabloya göre hangi alanda kullanıldıklarını yazalım.



AYDINLATMA

ISINMA

İLETİŞİM

EV İŞLERİ - TEMİZLİK

