


Adı :

Soyadı:

2. Sınıf Matematik

Doğal Sayılar Onluk-Birlik-2

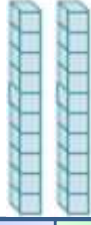
Verilen nesnelere sayısını yazınız.



..... onluk

..... birlik

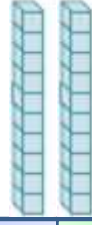
.....



..... onluk

..... birlik

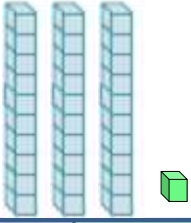
.....



..... onluk

..... birlik

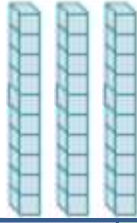
.....



..... onluk

..... birlik

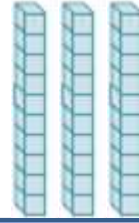
.....



..... onluk

..... birlik

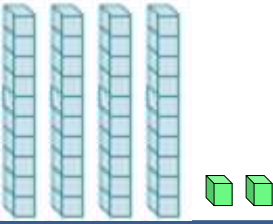
.....



..... onluk

..... birlik

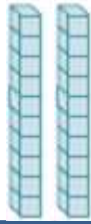
.....



..... onluk

..... birlik

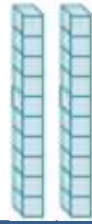
.....



..... onluk

..... birlik

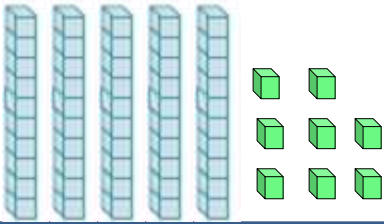
.....



..... onluk

..... birlik

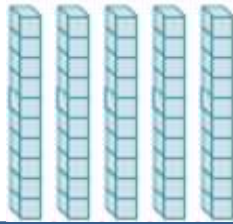
.....



..... onluk

..... birlik


.....



..... onluk

..... birlik

.....



..... onluk

..... birlik

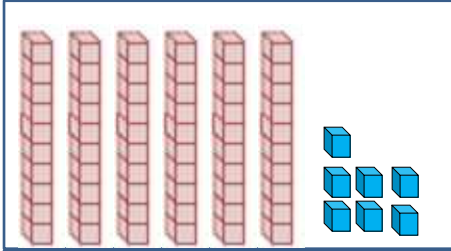
.....

Adı :
Soyadı:

2. Sınıf Matematik

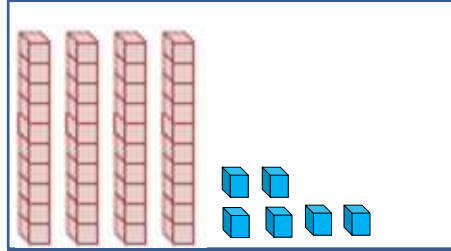
Doğal Sayılar Onluk-Birlik-2

Verilen nesnelere sayısını yazınız.



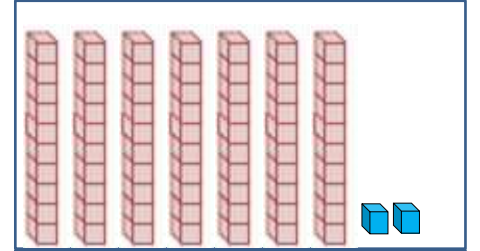
..... onluk birlik

.....



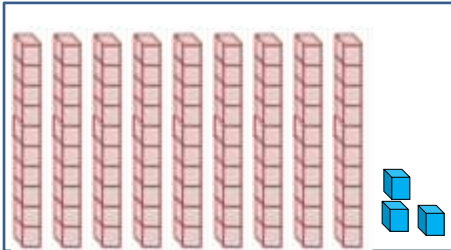
..... onluk birlik

.....



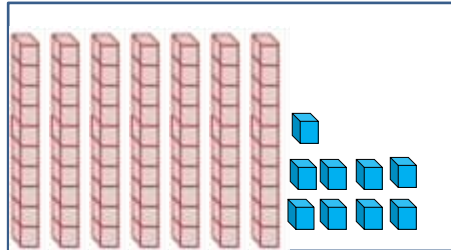
..... onluk birlik

.....



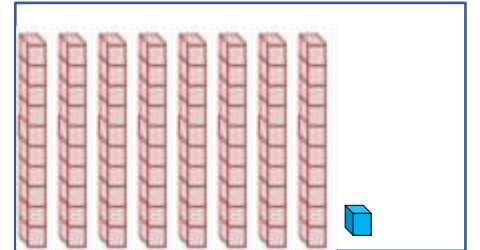
..... onluk birlik

.....



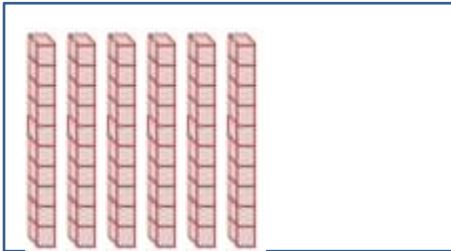
..... onluk birlik

.....



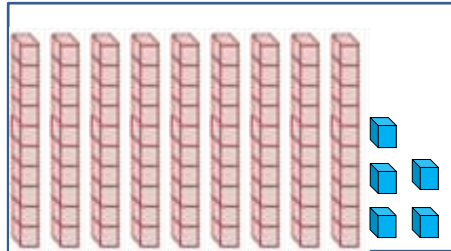
..... onluk birlik

.....



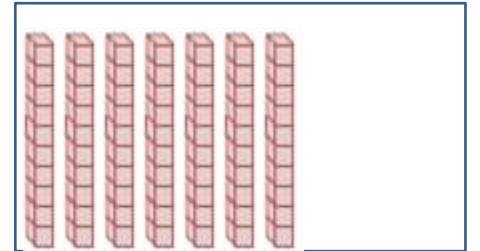
..... onluk birlik

.....



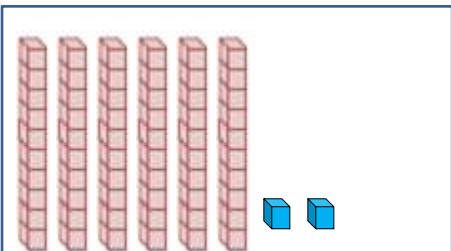
..... onluk birlik

.....



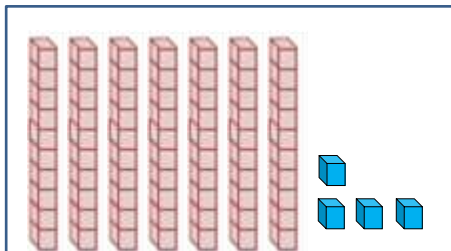
..... onluk birlik

.....



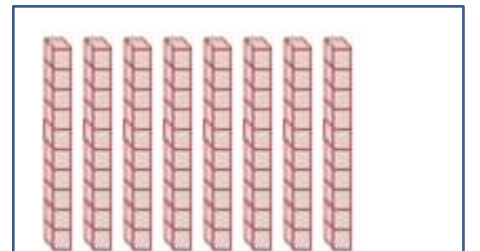
..... onluk birlik

.....



..... onluk birlik

.....



..... onluk birlik

.....