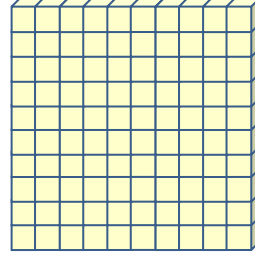


Adı : .....  
Soyadı: .....




3. Sınıf  
Matematik


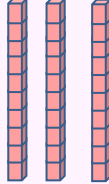

Doğal Sayılar  
Okuma-Yazma-1


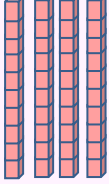

Verilen modellerin isimlerini yazalım.






Verilen modellerin sayılarını örneğe göre yazalım.

		
<i>Yüzlük</i>	<i>Onluk</i>	<i>Birlik</i>
1	1	2
<i>yüz</i>	<i>on</i>	<i>iki</i>
112		
<i>Yüz on iki</i>		

		
<i>Yüzlük</i>	<i>Onluk</i>	<i>Birlik</i>

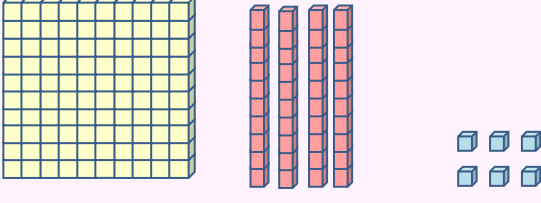
		
<i>Yüzlük</i>	<i>Onluk</i>	<i>Birlik</i>

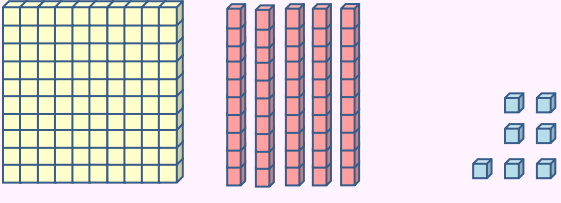
		
<i>Yüzlük</i>	<i>Onluk</i>	<i>Birlik</i>

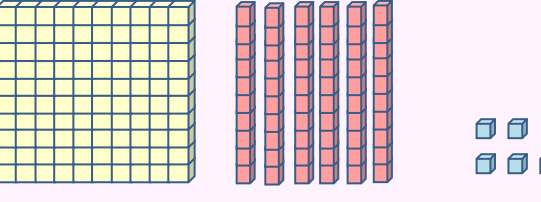
Adı : .....  
Soyadı: .....

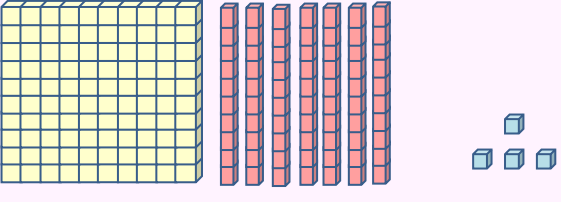
### 3. Sınıf Matematik

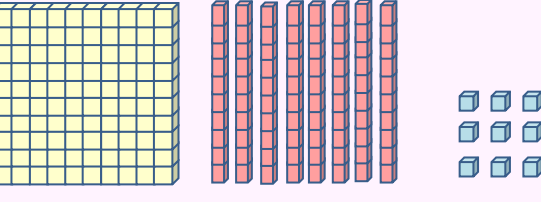
### Doğal Sayılar Okuma-Yazma-1

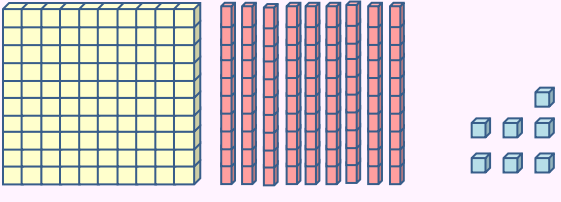
		
<i>Yüzlük</i>	<i>Onluk</i>	<i>Birlik</i>

		
<i>Yüzlük</i>	<i>Onluk</i>	<i>Birlik</i>

		
<i>Yüzlük</i>	<i>Onluk</i>	<i>Birlik</i>

		
<i>Yüzlük</i>	<i>Onluk</i>	<i>Birlik</i>

		
<i>Yüzlük</i>	<i>Onluk</i>	<i>Birlik</i>

		
<i>Yüzlük</i>	<i>Onluk</i>	<i>Birlik</i>