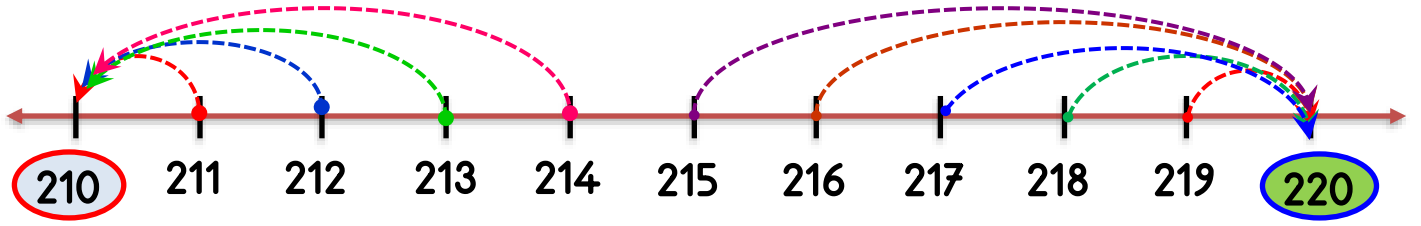


Adı :

Soyadı:

3. Sınıf
Matematik

Doğal Sayılar
Yuvarlama-1



Verilen doğal sayıların hangi **onluklar** arasında olduğunu yazınız. Hangi **onluğa** yakın olduğunu işaretleyiniz.

	212	
	217	
	213	
	356	
	487	
	834	
	308	
	774	
	976	
	375	
	527	

	218	
	211	
	215	
	349	
	511	
	526	
	425	
	555	
	157	
	426	
	641	

	214	
	219	
	216	
	562	
	923	
	205	
	639	
	698	
	243	
	666	
	304	

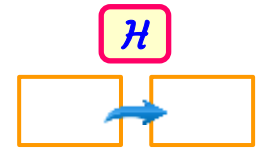
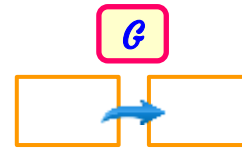
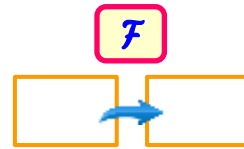
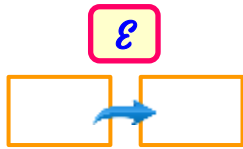
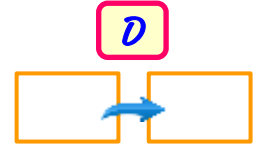
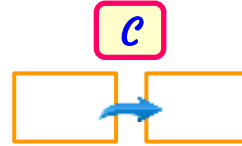
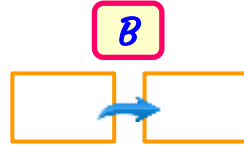
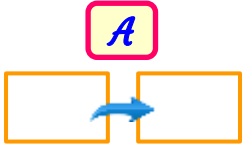
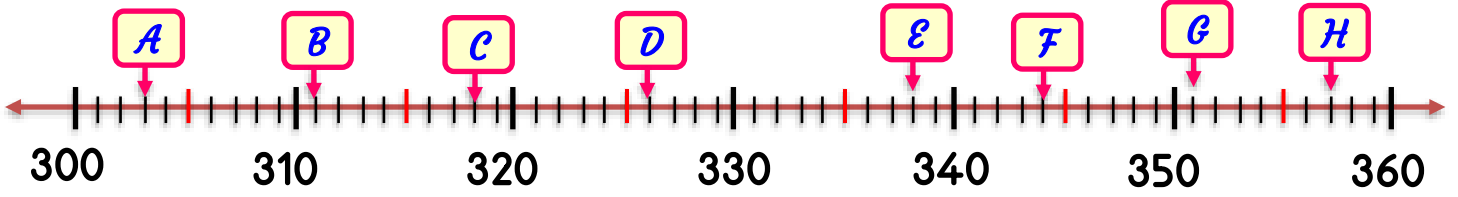
Adı :

Soyadı:

3. Sınıf
Matematik

Doğal Sayılar
Yuvarlama-1

Harflerle gösterilen sayıyı bulunuz. Hangi onluğa yakın olduğunu yazınız.



Verilen doğal sayıların hangi onluğa yakın olduğunu işaretleyiniz.

