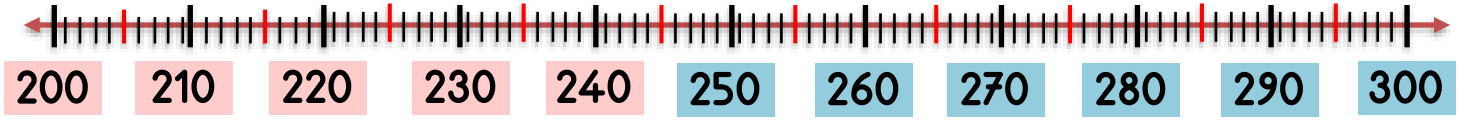


Adı :

Soyadı:

3. Sınıf
Matematik

Doğal Sayılar
Yuvarlama-3



Son iki basamağı 50'den büyük sayılar sonraki yüzlüğe,
Son iki basamağı 50'den küçük sayılar bulunduğu yüzlüğe,

Verilen sayılar hangi yüzlükler arasındadır. Hangisine daha yakındır?

185

126

152

249

201

285

333

350

362

453

487

426

505

539

548

699

674

612

777

734

749

850

849

899

945

979

975

450

451

449

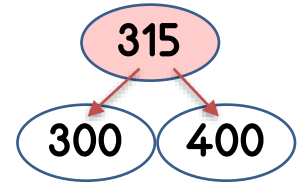
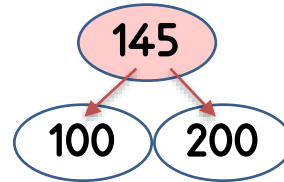
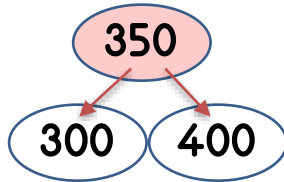
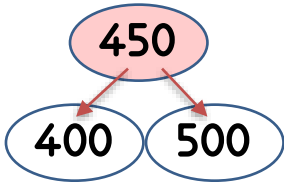
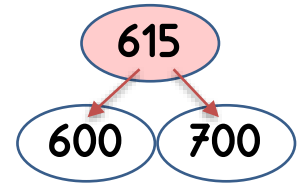
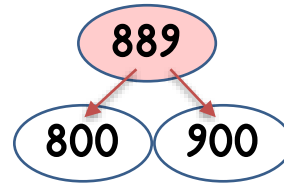
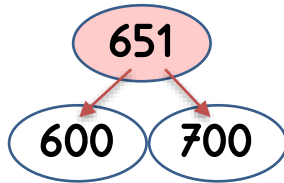
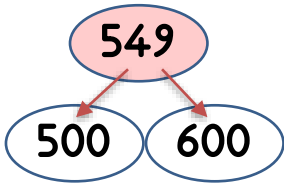
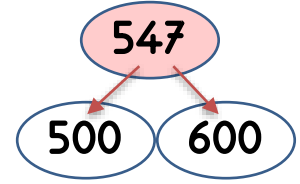
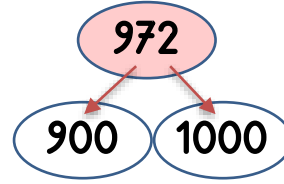
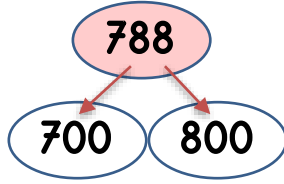
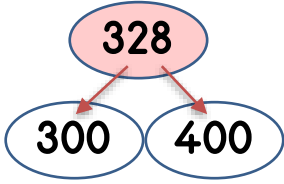
Adı :

Soyadı:

3. Sınıf
Matematik

Doğal Sayılar
Yuvarlama-3

Verilen doğal sayıların hangi yüzlüğe yakın olduğunu işaretleyiniz.



Verilen doğal sayıların hangi yüzlüğe yakın olduğunu yazınız.

152 →

385 →

751 →

849 →

550 →

635 →

414 →

299 →

776 →

803 →

864 →

925 →

999 →

748 →

850 →

106 →

280 →

370 →

475 →

594 →

641 →

730 →

881 →

949 →

345 →

126 →

247 →

455 →