

Adı : .....

Soyadı: .....

3. Sınıf  
Matematik

Doğal Sayılar  
Basamaklar-5

*Sayı değerlerini, basamak değerlerini ve yüzlük, onluk ve birlik sayılarını yazınız.*

| Sayı | Sayı Değeri | Basamak Değeri | Yüzlük, Onluk ve Birlik Sayıları |
|------|-------------|----------------|----------------------------------|
| 452  | 4-5-2       | 400 + 50 + 2   | 4 yüzlük + 5 onluk + 2 birlik    |
| 867  |             |                | .....+.....+.....                |
| 793  |             |                | .....+.....+.....                |
| 504  |             |                | .....+.....+.....                |
| 970  |             |                | .....+.....+.....                |
| 315  |             |                | .....+.....+.....                |
| 555  |             |                | .....+.....+.....                |
| 606  |             |                | .....+.....+.....                |
| 101  |             |                | .....+.....+.....                |
| 330  |             |                | .....+.....+.....                |
| 856  |             |                | .....+.....+.....                |
| 789  |             |                | .....+.....+.....                |
| 990  |             |                | .....+.....+.....                |
| 202  |             |                | .....+.....+.....                |
| 309  |             |                | .....+.....+.....                |

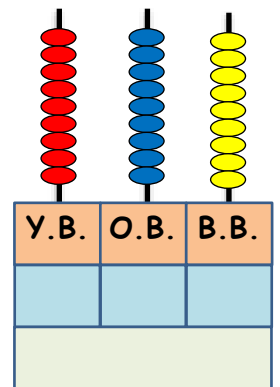
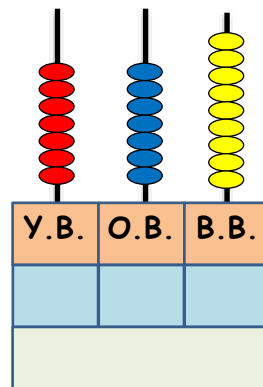
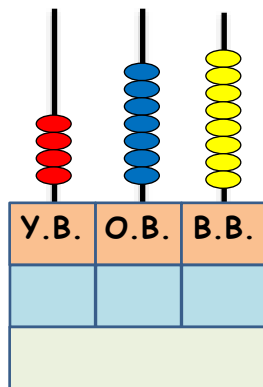
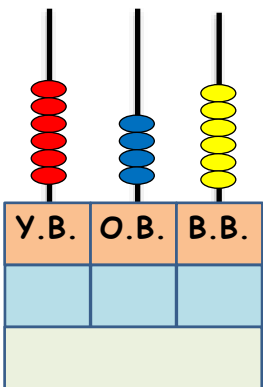
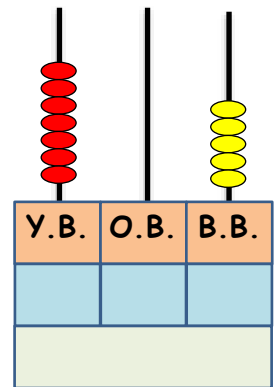
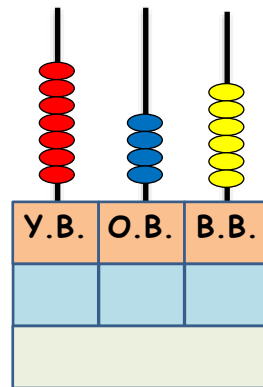
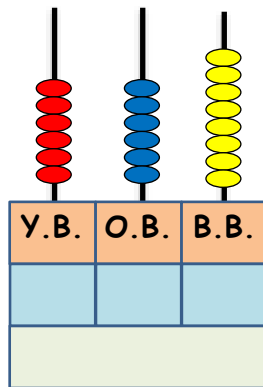
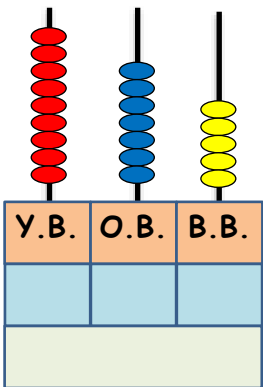
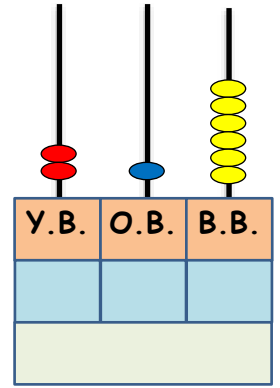
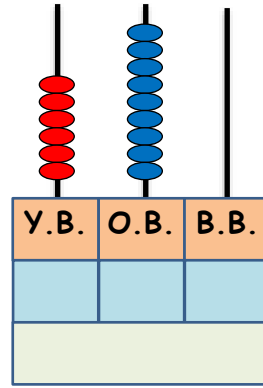
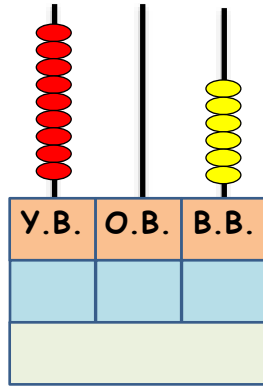
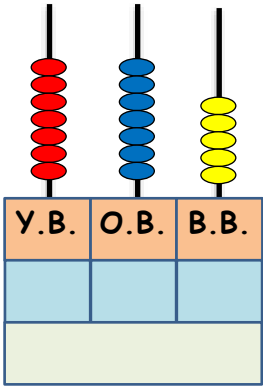
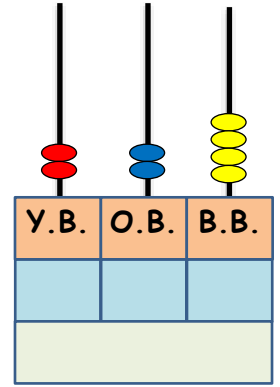
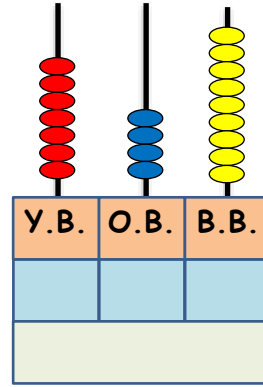
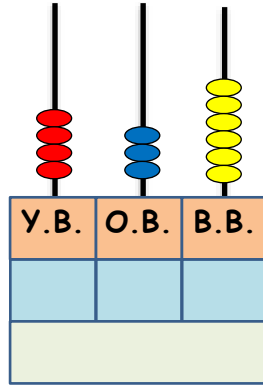
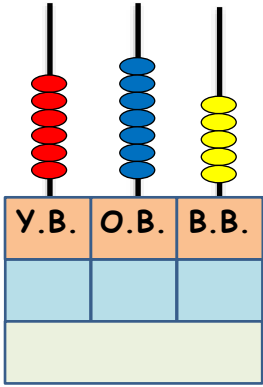
Adı : .....

Soyadı: .....

3. Sınıf  
Matematik

Doğal Sayılar  
Basamaklar-5

Sayı boncuğuna göre basamak değerlerini yazınız.



Adı : .....

Soyadı: .....

3. Sınıf  
Matematik

Doğal Sayılar  
Basamaklar-5

Verilen sayının basamak değerlerini yazarak sayı boncuğunu boyayınız.

