


Adı :

Soyadı:

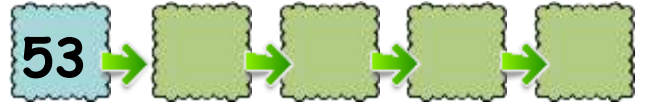
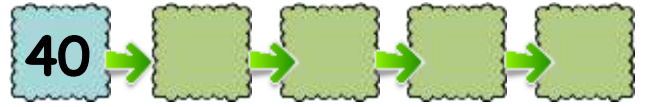

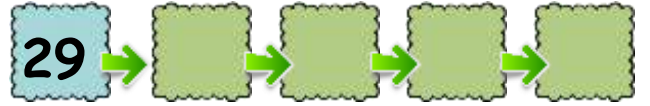
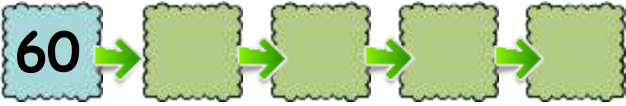
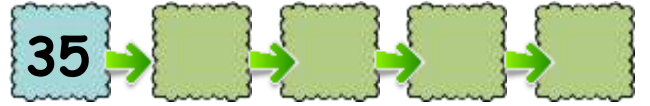

3. Sınıf
Matematik

Doğal Sayılar
6'şar Ritmik Sayma-1

Aşağıdaki nesnelere sayarak yazalım.

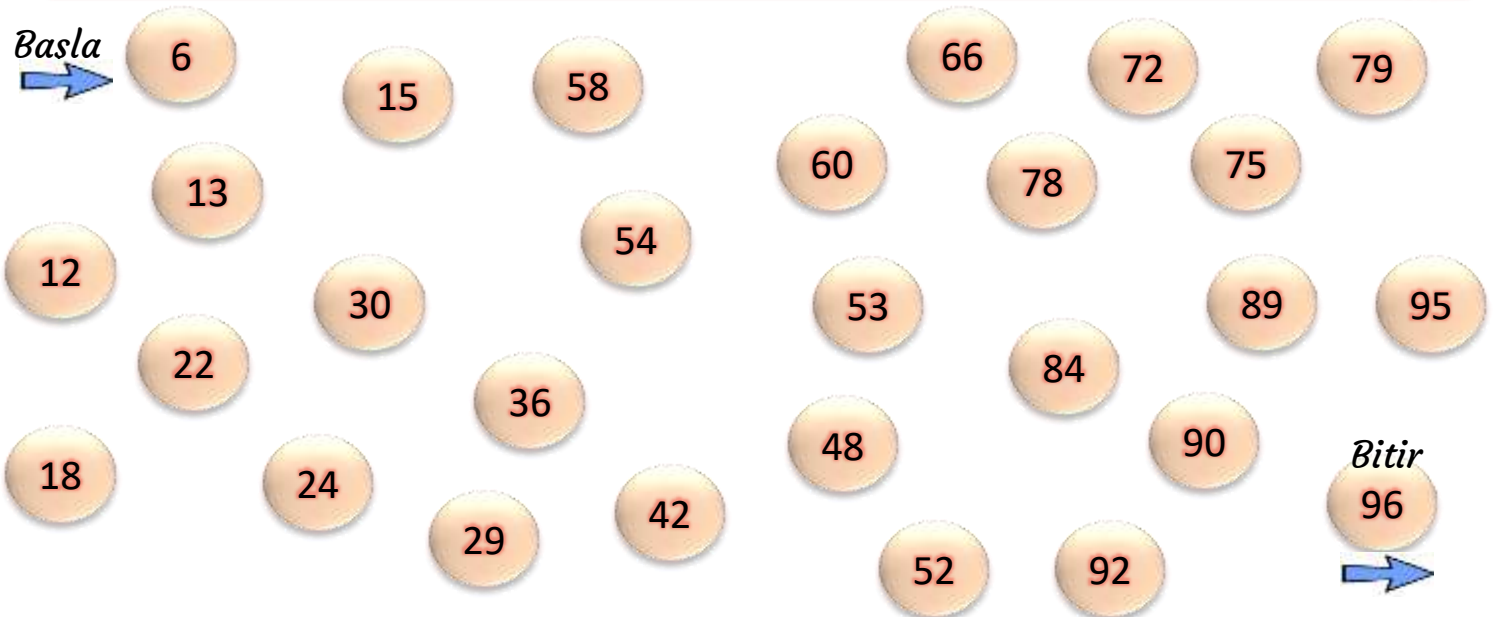


Verilen sayıdan başlayarak 6'şar ritmik sayma yapınız.



Verilen sayıdan başlayarak 6'şar ritmik sayma yaparak birleştiriniz.

Basla →



Adı :

Soyadı:

3. Sınıf
Matematik

Doğal Sayılar
6'şar Ritmik Sayma-1

Verilen sayıdan başlayarak 6'şar ritmik sayma yaparak boyayınız.

1	2	3	4	5	6	7	8	9	10	11	12	13	14
15	16	17	18	19	20	21	22	23	24	25	26	27	28
29	30	31	32	33	34	35	36	37	38	39	40	41	42
43	44	45	46	47	48	49	50	51	52	53	54	55	56
57	58	59	60	61	62	63	64	65	66	67	68	69	70
71	72	73	74	75	76	77	78	79	80	81	82	83	84
85	86	87	88	89	90	91	92	93	94	95	96	97	98

1	2	3	4	5	6	7	8	9	10	11	12	13	14
15	16	17	18	19	20	21	22	23	24	25	26	27	28
29	30	31	32	33	34	35	36	37	38	39	40	41	42
43	44	45	46	47	48	49	50	51	52	53	54	55	56
57	58	59	60	61	62	63	64	65	66	67	68	69	70
71	72	73	74	75	76	77	78	79	80	81	82	83	84
85	86	87	88	89	90	91	92	93	94	95	96	97	98

6'şar ritmik saymaya göre önceki ve sonraki sayıları yazınız.

