

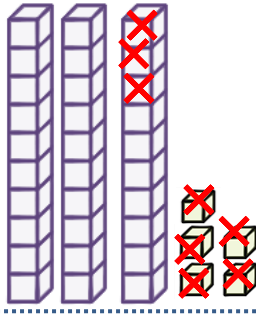
Adı :

Soyadı:



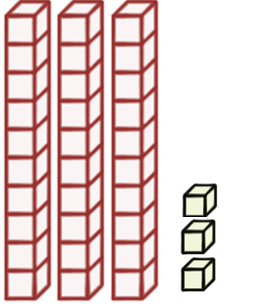
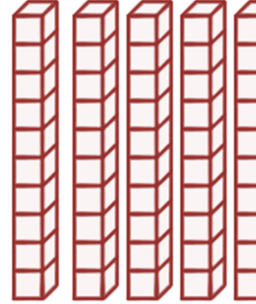
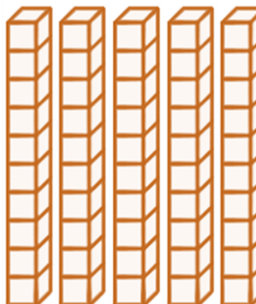
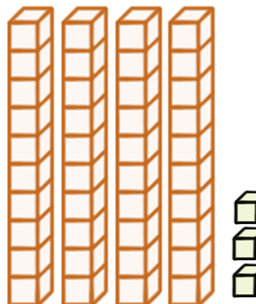
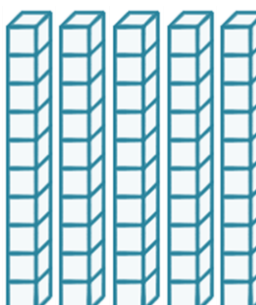
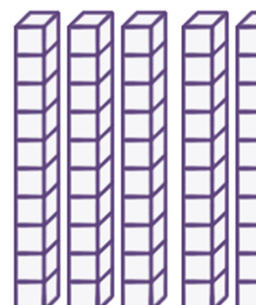
2. Sınıf Matematik

Çıkarma İşlemi Onluk Bozarak-1

Çıkarma işlemlerini örneğe göre yapınız.


$$\begin{array}{r} 3 \ 5 \\ - 1 \ 8 \\ \hline \end{array}$$

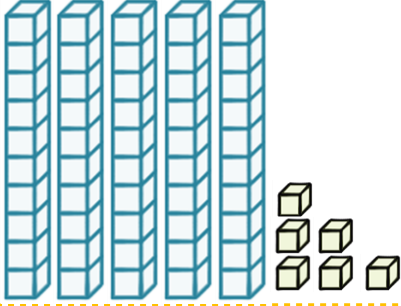
5 tane birlikten 8 birlik çıkamaz.
Yandaki onluklardan 1 tanesini alıriz.
Toplam 15 tane birliğimiz oldu.
15 birlikten 8 birlik çıkarırız.
7 birlik kalır.


$$\begin{array}{r} 4 \ 4 \\ - 1 \ 7 \\ \hline \end{array}$$

$$\begin{array}{r} 6 \ 2 \\ - 2 \ 8 \\ \hline \end{array}$$

$$\begin{array}{r} 3 \ 3 \\ - 1 \ 9 \\ \hline \end{array}$$

$$\begin{array}{r} 5 \ 6 \\ - 2 \ 8 \\ \hline \end{array}$$

$$\begin{array}{r} 5 \ 1 \\ - 3 \ 9 \\ \hline \end{array}$$

$$\begin{array}{r} 4 \ 3 \\ - 2 \ 6 \\ \hline \end{array}$$

$$\begin{array}{r} 7 \ 1 \\ - 3 \ 6 \\ \hline \end{array}$$

$$\begin{array}{r} 5 \ 6 \\ - 2 \ 8 \\ \hline \end{array}$$

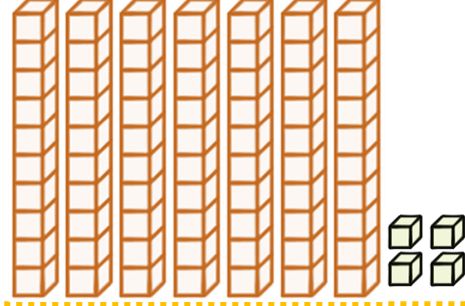
Adı :
Soyadı:

2. Sınıf Matematik


Çıkarma İşlemi Onluk Bozarak-1



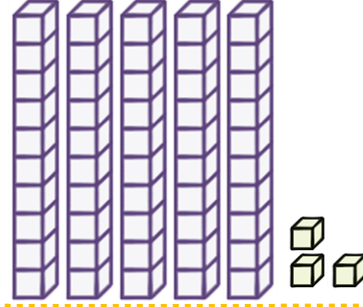
$$\begin{array}{r} 56 \\ - 28 \\ \hline \end{array}$$



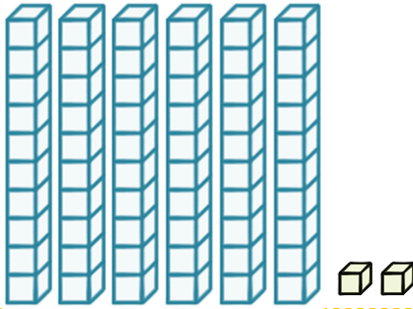
$$\begin{array}{r} 74 \\ - 47 \\ \hline \end{array}$$



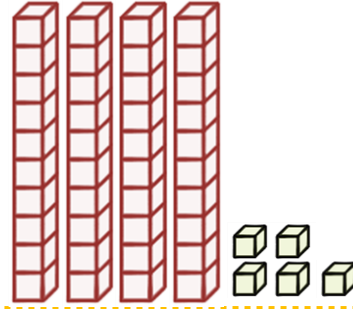
$$\begin{array}{r} 66 \\ - 39 \\ \hline \end{array}$$




$$\begin{array}{r} 53 \\ - 28 \\ \hline \end{array}$$



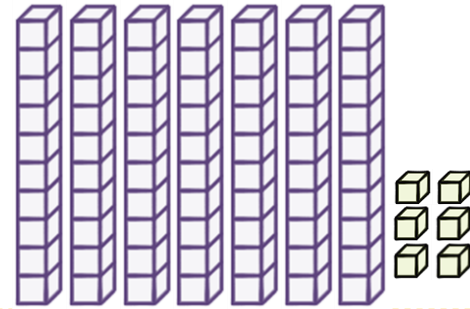
$$\begin{array}{r} 62 \\ - 26 \\ \hline \end{array}$$



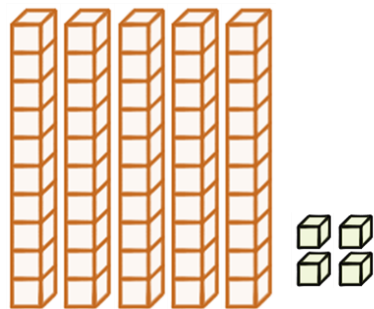
$$\begin{array}{r} 71 \\ - 36 \\ \hline \end{array}$$



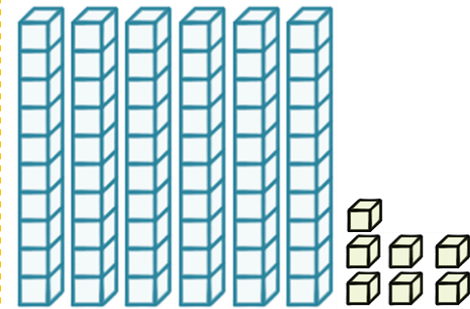
$$\begin{array}{r} 63 \\ - 45 \\ \hline \end{array}$$



$$\begin{array}{r} 76 \\ - 48 \\ \hline \end{array}$$



$$\begin{array}{r} 54 \\ - 29 \\ \hline \end{array}$$



$$\begin{array}{r} 67 \\ - 29 \\ \hline \end{array}$$