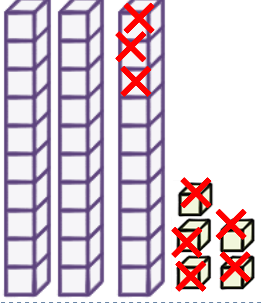


Adı : .....  
Soyadı: .....

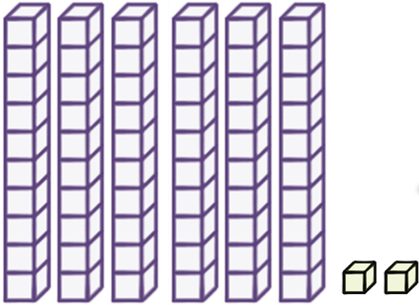

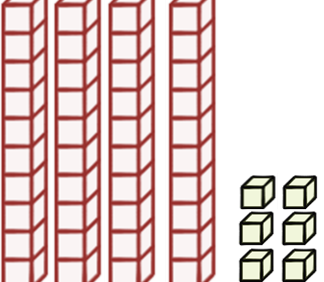
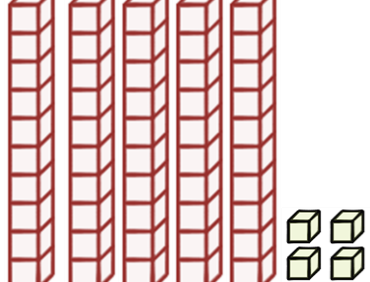
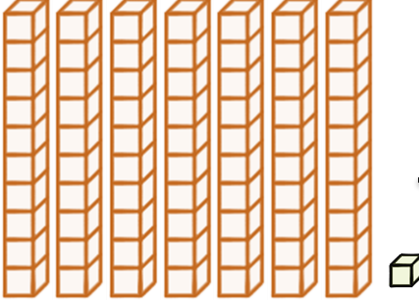
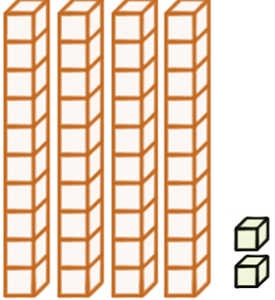
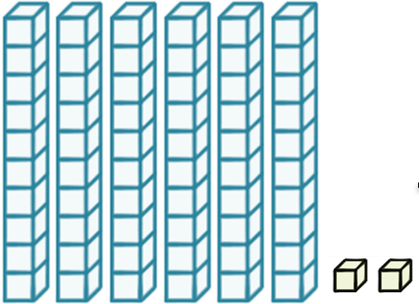
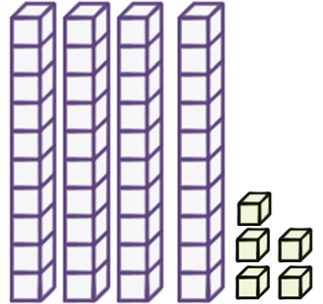
## 2. Sınıf Matematik

## Çıkarma İşlemi Onluk Bozarak-2

Çıkarma işlemlerini örneğe göre yapınız.


$$\begin{array}{r} 3 \ 5 \\ - 1 \ 8 \\ \hline \end{array}$$


5 tane birlikten 8 birlik çıkamaz.  
Yandaki onluklardan 1 tanesini alırsak,  
Toplam 15 tane birliğimiz oldu.  
15 birlikten 8 birlik çıkarırız.  
7 birlik kalır.


$$\begin{array}{r} 5 \ 2 \\ - 2 \ 5 \\ \hline \end{array}$$

$$\begin{array}{r} 5 \ 1 \\ - 3 \ 6 \\ \hline \end{array}$$

$$\begin{array}{r} 4 \ 6 \\ - 2 \ 8 \\ \hline \end{array}$$

$$\begin{array}{r} 5 \ 4 \\ - 1 \ 7 \\ \hline \end{array}$$

$$\begin{array}{r} 7 \ 1 \\ - 3 \ 3 \\ \hline \end{array}$$

$$\begin{array}{r} 4 \ 2 \\ - 1 \ 7 \\ \hline \end{array}$$

$$\begin{array}{r} 6 \ 2 \\ - 4 \ 9 \\ \hline \end{array}$$

$$\begin{array}{r} 4 \ 5 \\ - 2 \ 8 \\ \hline \end{array}$$

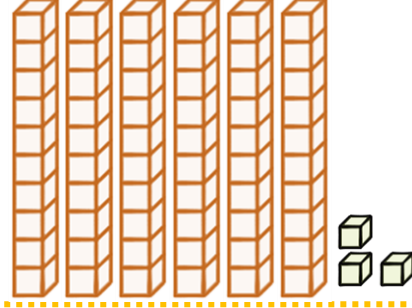
Adı : .....  
Soyadı: .....

## 2. Sınıf Matematik

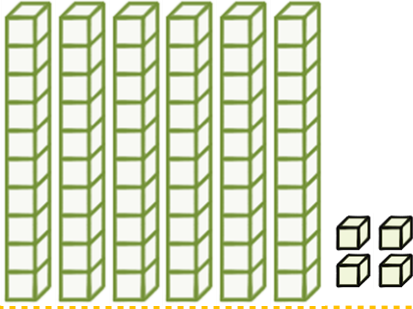
## Çıkarma İşlemi Onluk Bozarak-2




$$\begin{array}{r} 55 \\ - 37 \\ \hline \end{array}$$



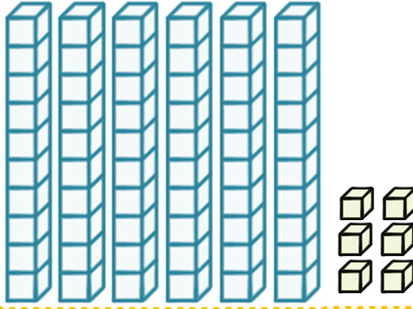
$$\begin{array}{r} 63 \\ - 36 \\ \hline \end{array}$$



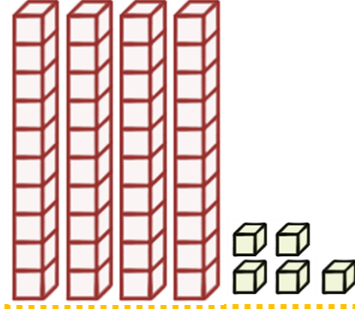
$$\begin{array}{r} 64 \\ - 18 \\ \hline \end{array}$$



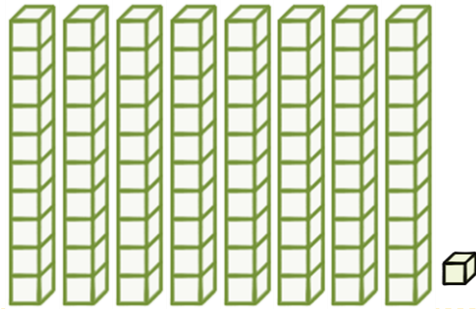
$$\begin{array}{r} 52 \\ - 35 \\ \hline \end{array}$$



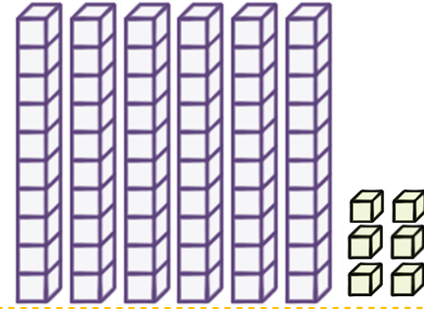
$$\begin{array}{r} 66 \\ - 48 \\ \hline \end{array}$$



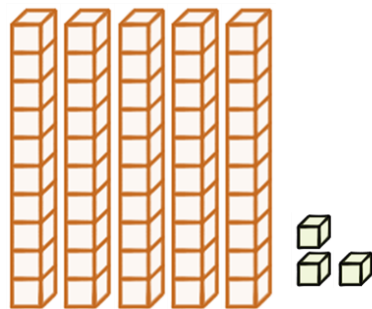
$$\begin{array}{r} 45 \\ - 29 \\ \hline \end{array}$$



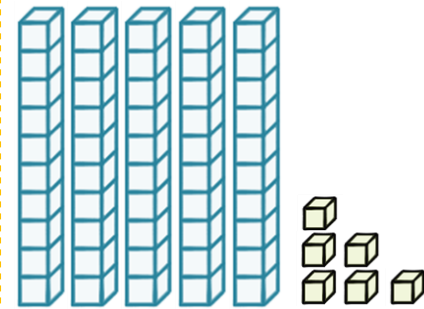
$$\begin{array}{r} 81 \\ - 57 \\ \hline \end{array}$$



$$\begin{array}{r} 66 \\ - 39 \\ \hline \end{array}$$



$$\begin{array}{r} 43 \\ - 39 \\ \hline \end{array}$$



$$\begin{array}{r} 56 \\ - 38 \\ \hline \end{array}$$