

Adı :
Soyadı:

2. Sınıf Matematik

Toplama İşlemi Eldeli Toplama-5

Toplama işlemlerini yapınız.

$\begin{array}{r} 13 \\ + \quad 5 \\ \hline \end{array}$	$\begin{array}{r} \quad \quad \\ + 14 \\ \hline \end{array}$	$\begin{array}{r} \quad \quad \\ + 19 \\ \hline \end{array}$	$\begin{array}{r} \quad \quad \\ + 21 \\ \hline \end{array}$	$\begin{array}{r} \quad \quad \\ + 16 \\ \hline \end{array}$
--	--	--	--	--

$\begin{array}{r} 10 \\ + 10 \\ \hline \end{array}$	$\begin{array}{r} \quad \quad \\ + 15 \\ \hline \end{array}$	$\begin{array}{r} \quad \quad \\ + 15 \\ \hline \end{array}$	$\begin{array}{r} \quad \quad \\ + 20 \\ \hline \end{array}$	$\begin{array}{r} \quad \quad \\ + 15 \\ \hline \end{array}$
---	--	--	--	--

$\begin{array}{r} 19 \\ + \quad 9 \\ \hline \end{array}$	$\begin{array}{r} \quad \quad \\ + \quad 9 \\ \hline \end{array}$	$\begin{array}{r} \quad \quad \\ + 19 \\ \hline \end{array}$	$\begin{array}{r} \quad \quad \\ + \quad 9 \\ \hline \end{array}$	$\begin{array}{r} \quad \quad \\ + 19 \\ \hline \end{array}$
--	---	--	---	--

$\begin{array}{r} 11 \\ + 11 \\ \hline \end{array}$	$\begin{array}{r} \quad \quad \\ + 18 \\ \hline \end{array}$	$\begin{array}{r} \quad \quad \\ + 18 \\ \hline \end{array}$	$\begin{array}{r} \quad \quad \\ + 18 \\ \hline \end{array}$	$\begin{array}{r} \quad \quad \\ + 18 \\ \hline \end{array}$
---	--	--	--	--

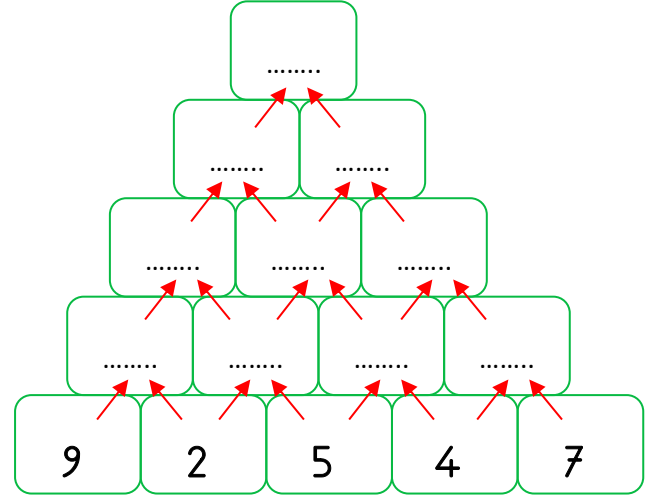
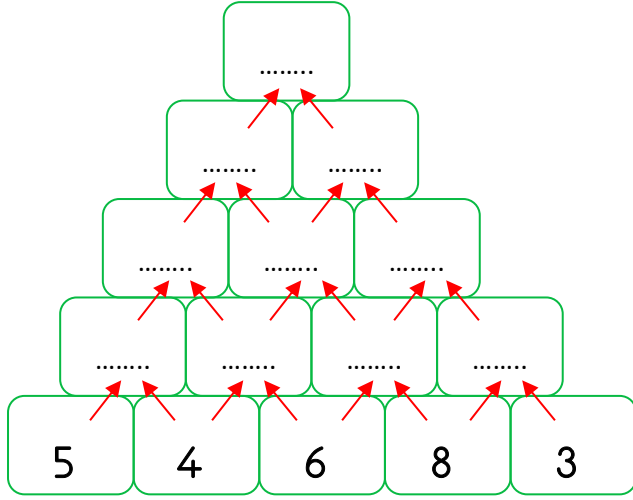
$\begin{array}{r} 17 \\ + \quad 7 \\ \hline \end{array}$	$\begin{array}{r} \quad \quad \\ + 17 \\ \hline \end{array}$	$\begin{array}{r} \quad \quad \\ + 17 \\ \hline \end{array}$	$\begin{array}{r} \quad \quad \\ + 17 \\ \hline \end{array}$	$\begin{array}{r} \quad \quad \\ + 17 \\ \hline \end{array}$
--	--	--	--	--

Adı :
Soyadı:


2. Sınıf Matematik

Toplama İşlemi Eldeli Toplama-5

En aşağıdaki sayıları toplayarak piramidin tepesine ulaşınız.




Toplamlarına göre balonları boyayınız.



$$\begin{array}{r} 49 \\ + 27 \\ \hline \end{array}$$

$$\begin{array}{r} 35 \\ + 48 \\ \hline \end{array}$$



$$\begin{array}{r} 57 \\ + 37 \\ \hline \end{array}$$

$$\begin{array}{r} 26 \\ + 49 \\ \hline \end{array}$$

$$\begin{array}{r} 34 \\ + 37 \\ \hline \end{array}$$

$$\begin{array}{r} 26 \\ + 28 \\ \hline \end{array}$$

$$\begin{array}{r} 55 \\ + 29 \\ \hline \end{array}$$

$$\begin{array}{r} 66 \\ + 26 \\ \hline \end{array}$$

$$\begin{array}{r} 44 \\ + 38 \\ \hline \end{array}$$

$$\begin{array}{r} 53 \\ + 28 \\ \hline \end{array}$$