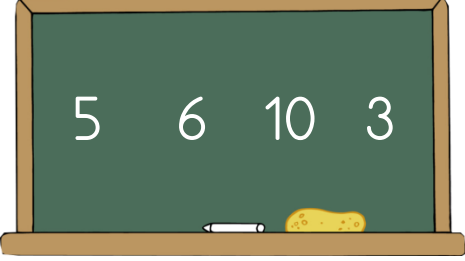


Adı : .....  
Soyadı: .....

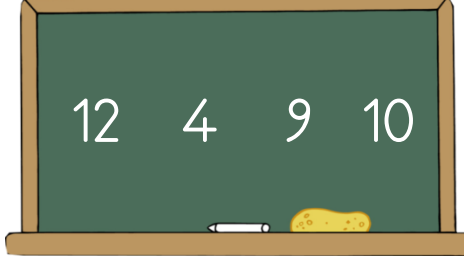
1 . Sınıf  
Matematik

Doğal Sayılar  
Sıralama


En büyük sayıdan en küçük sayıya sıralayınız.



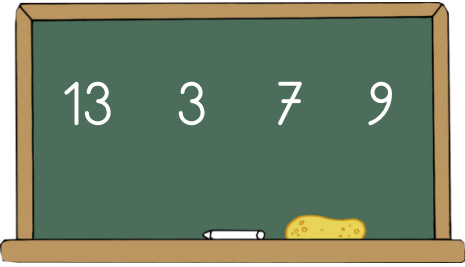
--	--	--	--




--	--	--	--



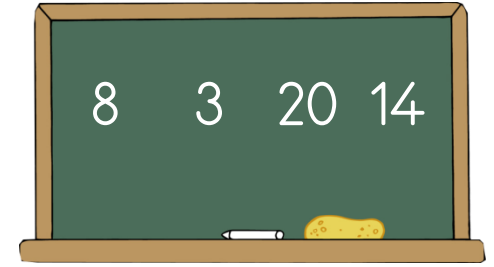
--	--	--	--





--	--	--	--



--	--	--	--



--	--	--	--



14	16	12	13	18

17	9	0	20	3

Adı : .....  
Soyadı: .....

1 . Sınıf  
Matematik

Doğal Sayılar  
Sıralama-1

En küçük sayıdan en büyük sayıya sıralayınız.

9 7 5 10

11 3 6 13

8 19 0 7

--	--	--	--

--	--	--	--

--	--	--	--

2 0 11 8


5 18 0 1

20 14 16 19

--	--	--	--

--	--	--	--

--	--	--	--



20	0	1	10	19

4	7	2	18	15