

Adı : .....  
Soyadı: .....

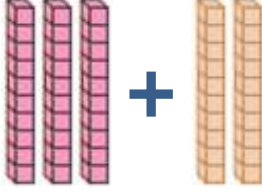

## 2. Sınıf Matematik

## Toplama İşlemi Zihinden Toplama-1

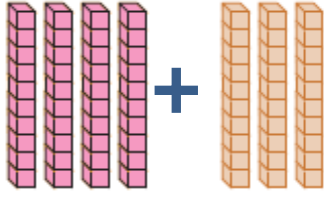

Aşağıdaki onlukları 10'ar sayarak toplayınız.

 + 

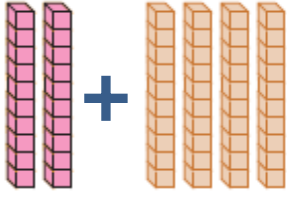
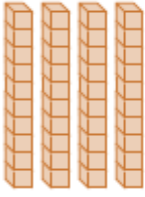
	2	0
+	1	0
<hr/>		
	3	0

 + 

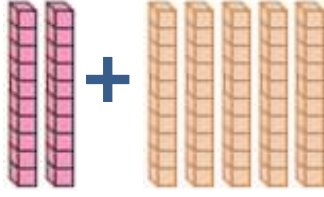

+		
<hr/>		

 + 

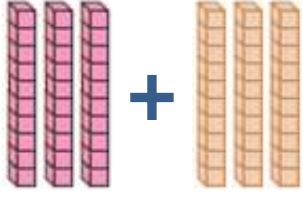

+		
<hr/>		

 + 

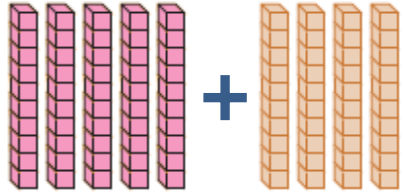
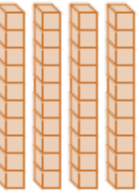
+		
<hr/>		

 + 

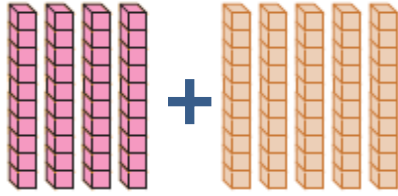
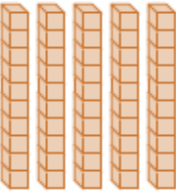
+		
<hr/>		

 + 

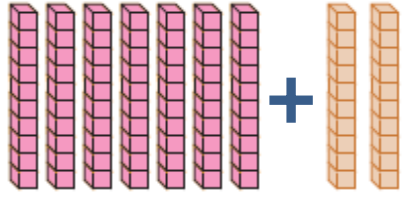

+		
<hr/>		

 + 

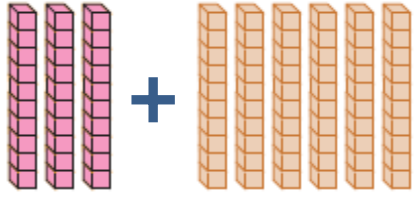
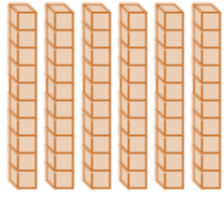
+		
<hr/>		

 + 

+		
<hr/>		

 + 

+		
<hr/>		

 + 

+		
<hr/>		

Adı : .....  
Soyadı: .....

## 2. Sınıf Matematik

## Toplama İşlemi Zihinden Toplama-1

Toplama işlemlerini yapınız.

$$\begin{array}{r} 10 \\ + 10 \\ \hline \end{array}$$

$$\begin{array}{r} 20 \\ + 10 \\ \hline \end{array}$$

$$\begin{array}{r} 30 \\ + 10 \\ \hline \end{array}$$

$$\begin{array}{r} 30 \\ + 20 \\ \hline \end{array}$$

$$\begin{array}{r} 20 \\ + 20 \\ \hline \end{array}$$

$$\begin{array}{r} 40 \\ + 10 \\ \hline \end{array}$$

$$\begin{array}{r} 40 \\ + 20 \\ \hline \end{array}$$

$$\begin{array}{r} 40 \\ + 40 \\ \hline \end{array}$$

$$\begin{array}{r} 30 \\ + 30 \\ \hline \end{array}$$

$$\begin{array}{r} 40 \\ + 30 \\ \hline \end{array}$$

$$\begin{array}{r} 50 \\ + 10 \\ \hline \end{array}$$

$$\begin{array}{r} 50 \\ + 30 \\ \hline \end{array}$$

$$\begin{array}{r} 50 \\ + 50 \\ \hline \end{array}$$

$$\begin{array}{r} 50 \\ + 20 \\ \hline \end{array}$$

$$\begin{array}{r} 50 \\ + 40 \\ \hline \end{array}$$

$$\begin{array}{r} 60 \\ + 20 \\ \hline \end{array}$$

$$\begin{array}{r} 60 \\ + 40 \\ \hline \end{array}$$

$$\begin{array}{r} 60 \\ + 10 \\ \hline \end{array}$$

$$\begin{array}{r} 60 \\ + 30 \\ \hline \end{array}$$

$$\begin{array}{r} 70 \\ + 20 \\ \hline \end{array}$$

$$\begin{array}{r} 70 \\ + 10 \\ \hline \end{array}$$

$$\begin{array}{r} 70 \\ + 30 \\ \hline \end{array}$$

$$\begin{array}{r} 80 \\ + 10 \\ \hline \end{array}$$

$$\begin{array}{r} 80 \\ + 20 \\ \hline \end{array}$$

$$\begin{array}{r} 90 \\ + 10 \\ \hline \end{array}$$

$$\begin{array}{r} 10 \\ + 30 \\ \hline \end{array}$$

$$\begin{array}{r} 10 \\ + 50 \\ \hline \end{array}$$

$$\begin{array}{r} 20 \\ + 40 \\ \hline \end{array}$$

$$\begin{array}{r} 30 \\ + 60 \\ \hline \end{array}$$

$$\begin{array}{r} 40 \\ + 50 \\ \hline \end{array}$$

$$\begin{array}{r} 30 \\ + 70 \\ \hline \end{array}$$

$$\begin{array}{r} 40 \\ + 60 \\ \hline \end{array}$$

$$\begin{array}{r} 30 \\ + 70 \\ \hline \end{array}$$

$$\begin{array}{r} 20 \\ + 80 \\ \hline \end{array}$$

$$\begin{array}{r} 10 \\ + 90 \\ \hline \end{array}$$

$$\begin{array}{r} 20 \\ + 70 \\ \hline \end{array}$$