

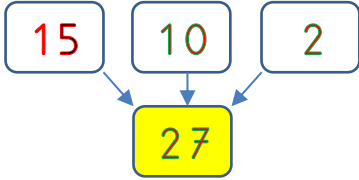
Adı : .....  
Soyadı: .....

2. Sınıf  
Matematik

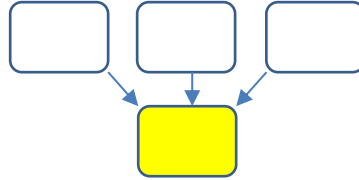
Toplama İşlemi  
Zihinden Toplama-5

Aşağıdaki onlukları 10'ar sayarak toplayınız.

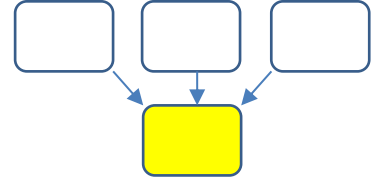
$15 + 12 = ?$



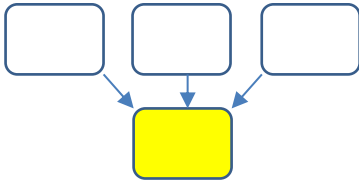
$23 + 14 = ?$



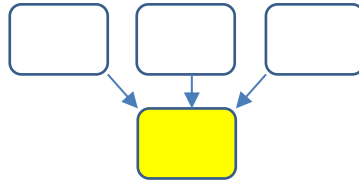
$32 + 15 = ?$



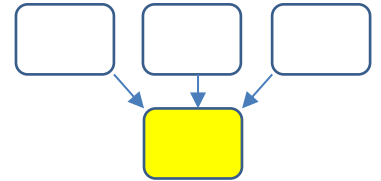
$35 + 24 = ?$



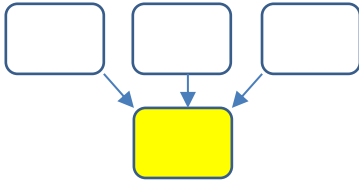
$42 + 14 = ?$



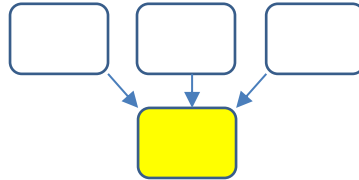
$38 + 16 = ?$



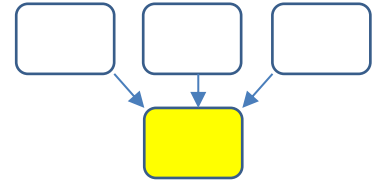
$20 + 15 = ?$



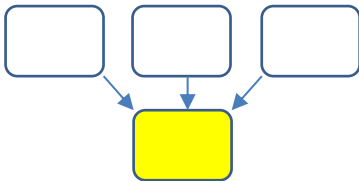
$43 + 17 = ?$



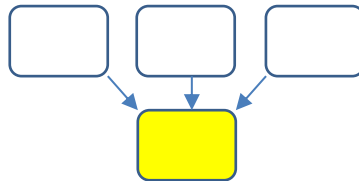
$52 + 14 = ?$



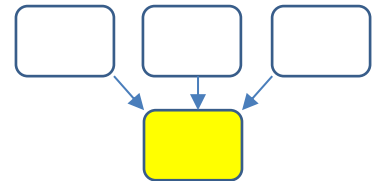
$52 + 42 = ?$



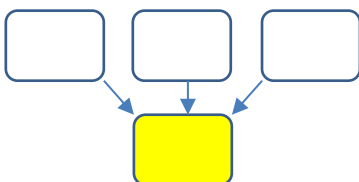
$35 + 17 = ?$



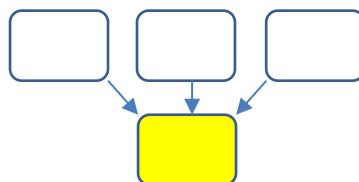
$36 + 34 = ?$



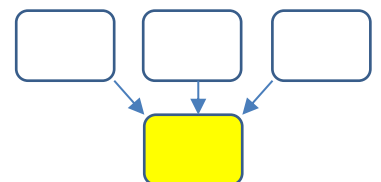
$27 + 15 = ?$



$34 + 42 = ?$



$18 + 21 = ?$



Adı : .....  
Soyadı: .....

## 2. Sınıf Matematik

## Toplama İşlemi Zihinden Toplama-5

Kuşlarla ağaçları eşleştiriniz.



$25+35$



$43+26$



$55+27$



$36+14$



$19+23$



$25+16$



82



50



41



60



69



42

Aşağıdaki sayıları zihinden toplayınız.

$$\begin{array}{r} 10 \\ 10 \\ + 20 \\ \hline \end{array}$$

$$\begin{array}{r} 20 \\ 20 \\ + 30 \\ \hline \end{array}$$

$$\begin{array}{r} 30 \\ 20 \\ + 40 \\ \hline \end{array}$$

$$\begin{array}{r} 10 \\ 20 \\ + 50 \\ \hline \end{array}$$

$$\begin{array}{r} 20 \\ 40 \\ + 30 \\ \hline \end{array}$$

$$\begin{array}{r} 30 \\ 30 \\ + 30 \\ \hline \end{array}$$

$$\begin{array}{r} 20 \\ 20 \\ + 50 \\ \hline \end{array}$$

$$\begin{array}{r} 15 \\ 10 \\ + 20 \\ \hline \end{array}$$

$$\begin{array}{r} 25 \\ 20 \\ + 10 \\ \hline \end{array}$$

$$\begin{array}{r} 23 \\ 10 \\ + 10 \\ \hline \end{array}$$

$$\begin{array}{r} 38 \\ 20 \\ + 30 \\ \hline \end{array}$$

$$\begin{array}{r} 41 \\ 10 \\ + 20 \\ \hline \end{array}$$

$$\begin{array}{r} 53 \\ 20 \\ + 10 \\ \hline \end{array}$$

$$\begin{array}{r} 27 \\ 20 \\ + 20 \\ \hline \end{array}$$

$$\begin{array}{r} 15 \\ 15 \\ + 10 \\ \hline \end{array}$$

$$\begin{array}{r} 25 \\ 25 \\ + 20 \\ \hline \end{array}$$

$$\begin{array}{r} 15 \\ 25 \\ + 20 \\ \hline \end{array}$$

$$\begin{array}{r} 20 \\ 15 \\ + 15 \\ \hline \end{array}$$

$$\begin{array}{r} 35 \\ 15 \\ + 20 \\ \hline \end{array}$$

$$\begin{array}{r} 26 \\ 10 \\ + 12 \\ \hline \end{array}$$

$$\begin{array}{r} 48 \\ 20 \\ + 13 \\ \hline \end{array}$$