


Adı : .....

Soyadı: .....

### 3. Sınıf Matematik

### Çarpma İşlemi-1

Toplama işlemlerinin sonucunu ritmik sayma yaparak bulunuz.



$$2 + 2 + 2 = \dots\dots\dots$$

3 tane 2 = ..... eder.

3 kere 2 = ..... eder.

$$3 \times 2 = \dots\dots\dots \text{ eder.}$$

Toplama işlemlerinin sonucunu ritmik sayma yaparak bulunuz.



$$2 + 2 + 2 + 2 + 2 + 2 = \dots\dots\dots$$

.....

.....

.....



$$2 + 2 + 2 + 2 + 2 = \dots\dots\dots$$

.....

.....

.....

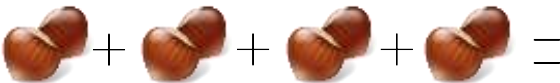


$$3 + 3 + 3 + 3 = \dots\dots\dots$$

.....

.....

.....



$$2 + 2 + 2 + 2 = \dots\dots\dots$$

.....

.....

.....



$$3 + 3 + 3 + 3 + 3 = \dots\dots\dots$$

.....

.....


.....

Adı : .....

Soyadı: .....

### 3. Sınıf Matematik

### Çarpma İşlemi-1



$$4 + 4 + 4 = \dots\dots\dots$$

.....

.....

.....

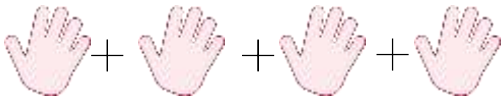


$$4 + 4 + 4 + 4 + 4 + 4 = \dots\dots\dots$$

.....

.....

.....




$$5 + 5 + 5 + 5 = \dots\dots\dots$$

.....

.....

.....




$$2 + 2 + 2 + 2 + 2 + 2 + 2 = \dots\dots\dots$$

.....

.....

.....

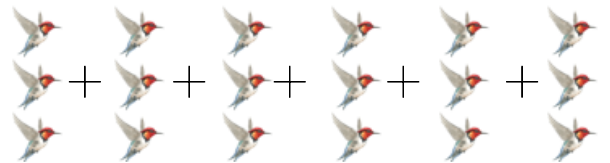


$$5 + 5 + 5 + 5 + 5 = \dots\dots\dots$$

.....

.....

.....



$$3 + 3 + 3 + 3 + 3 + 3 = \dots\dots\dots$$

.....

.....

.....