

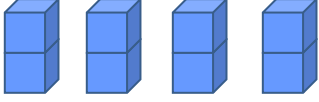
Adı : .....

Soyadı: .....

### 3. Sınıf Matematik

### Çarpma İşlemi-2

Kaç tane nesne olduğunu örnekteki gibi hesaplayınız.

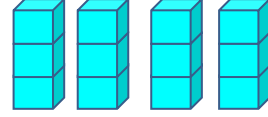


4 tane 2 = 8 eder.

$$4 \times 2 = 8$$

2'nin 4 katı 8 eder.

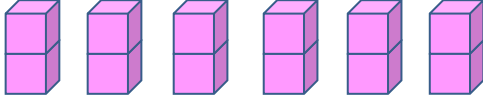
Kaç tane nesne olduğunu örnekteki gibi hesaplayınız.



.....

.....

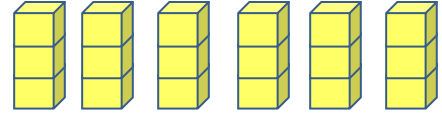
.....



.....

.....

.....



.....

.....

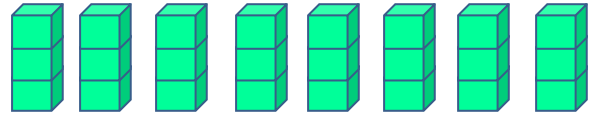
.....



.....

.....

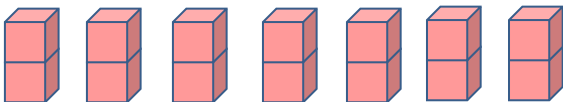
.....



.....

.....

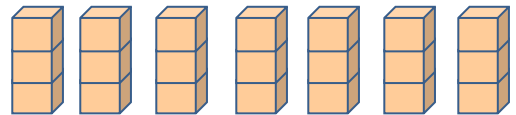
.....



.....

.....

.....



.....

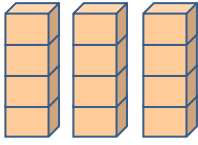
.....

.....

Adı : .....  
Soyadı: .....

### 3. Sınıf Matematik

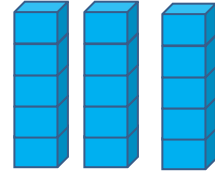
### Çarpma İşlemi-2



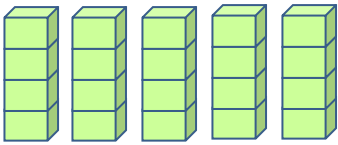
3 tane 4 = 12 eder.

$$3 \times 4 = 12$$

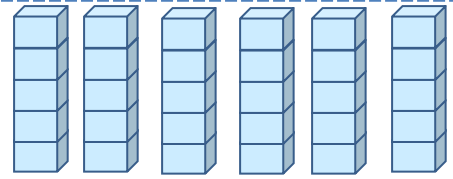
4'ün 3 katı 12 eder.



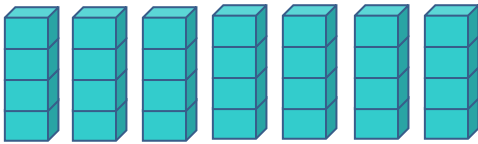
.....  
.....  
.....



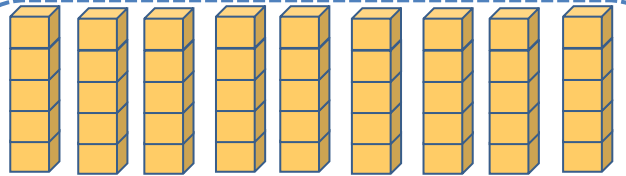
.....  
.....  
.....



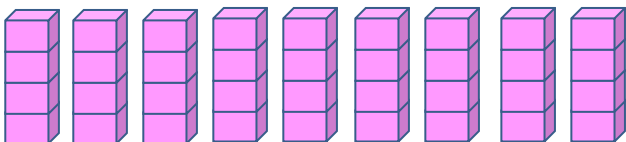
.....  
.....  
.....



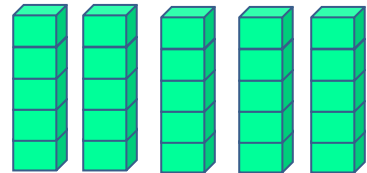
.....  
.....  
.....



.....  
.....  
.....



.....  
.....  
.....



.....  
.....  
.....