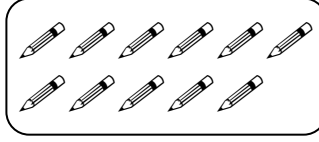






TOPLAMA İŞLEMİNİ ÖĞRENİYORUM




* Aşağıda verilen toplama işlemlerindeki noktalı yerleri dolduralım.



$$\begin{array}{r} 5 \\ + 6 \\ \hline 11 \end{array}$$

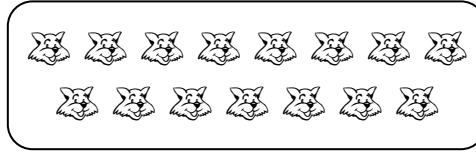

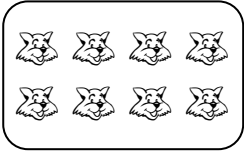


5 6 daha 11 eder.
5 + 6 = 11



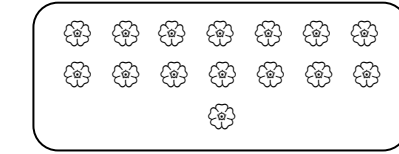
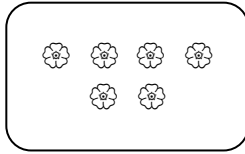
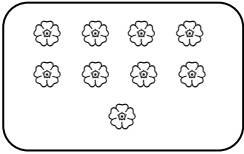
$$\begin{array}{r} \dots \\ + \dots \\ \hline \dots \end{array}$$

.... daha eder.
.... + =





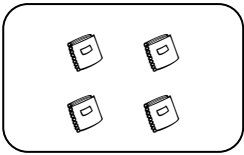
$$\begin{array}{r} \dots \\ + \dots \\ \hline \dots \end{array}$$

.... daha eder.
.... + =



$$\begin{array}{r} \dots \\ + \dots \\ \hline \dots \end{array}$$

.... daha eder.
.... + =



$$\begin{array}{r} \dots \\ + \dots \\ \hline \dots \end{array}$$

.... daha eder.
.... + =