

Adı : .....  
Soyadı: .....

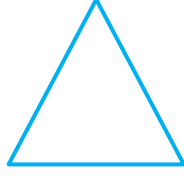
## 2. Sınıf Matematik

## Geometrik Şekiller-1


Aşağıdaki geometrik şekillerin isimlerini yazınız.



.....



.....


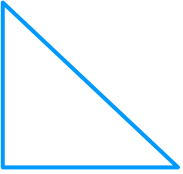


.....





.....

Aşağıdaki geometrik şekillerin köşelerini göstererek köşe sayılarını yazınız.



Aşağıdaki geometrik şekillerin kenarlarını farklı renklerle çiziniz. Kenar sayılarını yazınız.



Adı : .....  
Soyadı: .....


## 2. Sınıf Matematik

## Geometrik Şekiller-1

Aşağıdaki geometrik şekillerle ilgili boşlukları doldurunuz.




Adı:.....  
Köşe Sayısı:.....  
Kenar Sayısı:.....



Adı:.....  
Köşe Sayısı:.....  
Kenar Sayısı:.....




Adı:.....  
Köşe Sayısı:.....  
Kenar Sayısı:.....






Adı:.....  
Köşe Sayısı:.....  
Kenar Sayısı:.....



Aşağıdaki geometrik şekillerle ilgili yerlerle eşleştiriniz.



3 Kenarlı



4 Kenarlı



Kenarsız

3 Köşeli

4 Köşeli

Köşesiz