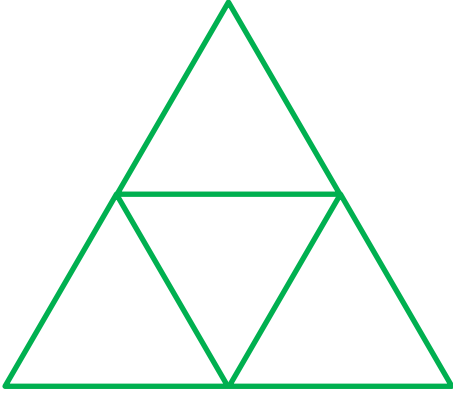


Adı :
Soyadı:

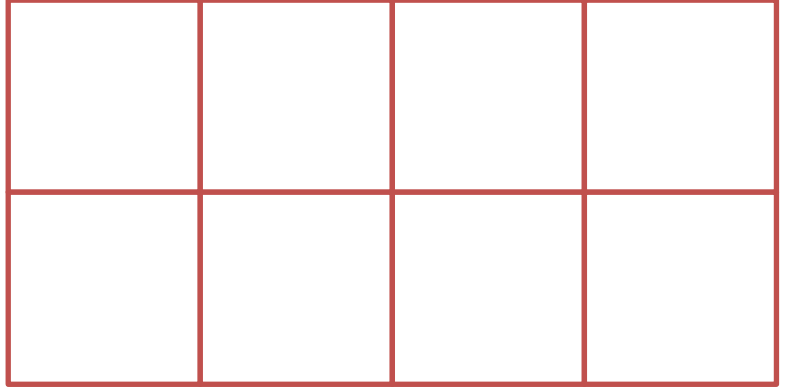
2. Sınıf
Matematik

Geometrik Şekiller-4


Aşağıdaki şekillerde bulunan geometrik şekillerin üzerini çizin.




.....tane üçgen vardır.



.....tane kare vardır.

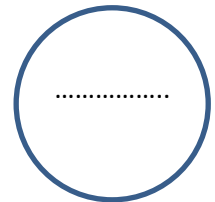
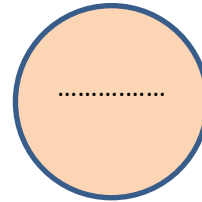
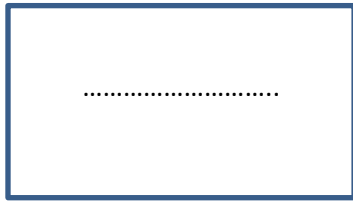



.....tane dikdörtgen vardır



.....tane çember vardır .

Aşağıdaki şekillerin isimlerini ve farklılıklarını yazınız.



Kare:

Dikdörtgen:

Daire:

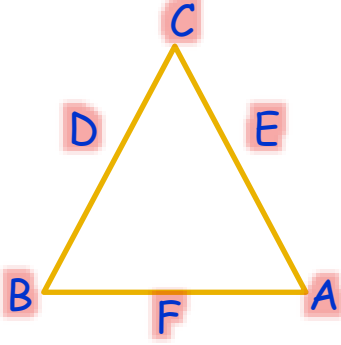
Çember:

Adı :
Soyadı:

2. Sınıf Matematik

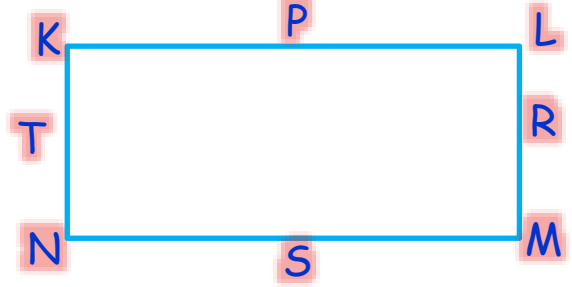
Geometrik Şekiller-4

Aşağıdaki şekillerin köşelerinde ve kenarlarında bulunan harfleri yazalım.



Köşelerinde:.....

Kenarlarında:.....



Köşelerinde:.....

Kenarlarında:.....

Aşağıdaki şekillerin kenarlarını verilen renge göre çiziniz.

