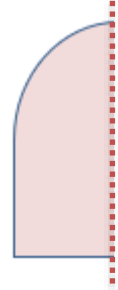
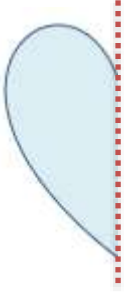

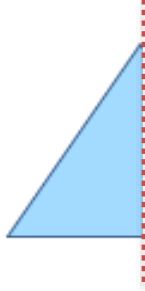
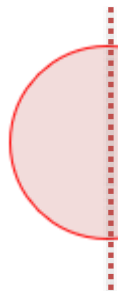
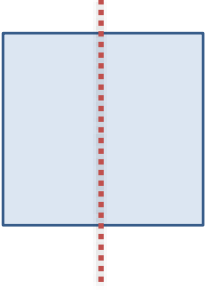


Adı :
Soyadı:

2. Sınıf
Matematik

Simetri-2

Aşağıdaki şekilleri örnekteki gibi tamamlayınız.



Aşağıdaki harflerin simetri doğrularını çiziniz. Simetri olmayan harfleri yazınız.

A B C Ç D E F G

H I J K L M N Ö


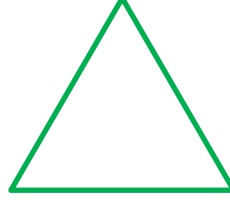


P R S T U V Y

Adı :
Soyadı:

2. Sınıf Matematik

Simetri-2

Aşağıdaki şekillere kaç tane simetri doğrusu çizebiliriz?



Aşağıdaki varlıkların simetri olup olmadıklarını yazınız.

