


Adı : .....

Soyadı: .....

3. Sınıf  
Matematik

Kesirler-1




$\frac{1}{4}$   
1 → Pay  
— → Kesir Çizgisi  
4 → Payda


Dörtte bir

4 parçadan 1 tanesi


Aşağıdaki şekilleri kesir olarak yazalım.




...  
—  
...



...  
—  
...



...  
—  
...



...  
—  
...




...  
—  
...



...  
—  
...




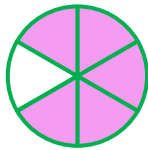
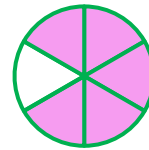
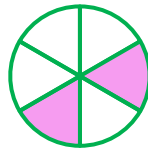
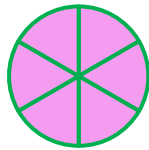
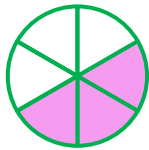
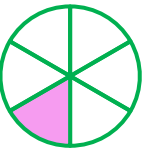
...  
—  
...



...  
—  
...




...  
—  
...



Adı : .....  
Soyadı: .....

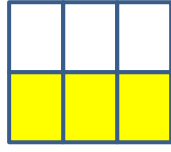
### 3. Sınıf Matematik

### Kesirler-1



$$\frac{1}{4}$$

Dörtte bir



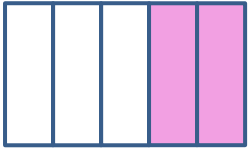
$$\frac{\dots}{\dots}$$

.....

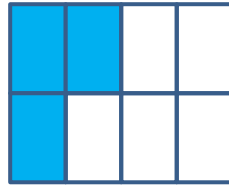


$$\frac{\dots}{\dots}$$

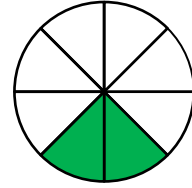
.....



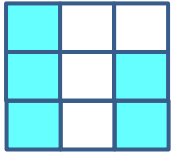
.....



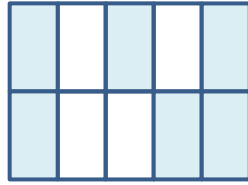
.....




.....



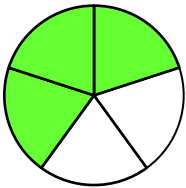
.....



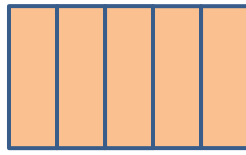
.....



.....



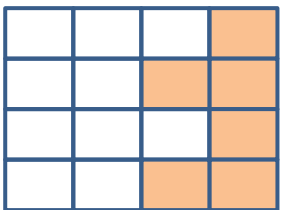
.....




.....




.....



.....



.....



.....