


Adı :

Soyadı:

3. Sınıf
Matematik


Kesirler-2

Verilen kesirlerin paylarını boyayalım, paydalarını yazalım.




$\frac{3}{\quad}$

...




$\frac{4}{\quad}$

...




$\frac{1}{\quad}$

...



$\frac{5}{\quad}$

...




$\frac{2}{\quad}$

...




$\frac{2}{\quad}$

...




$\frac{3}{\quad}$

...



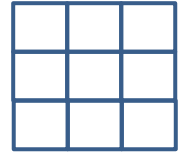
$\frac{5}{\quad}$

...



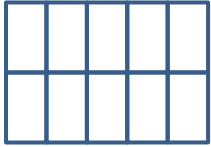
$\frac{2}{\quad}$

...




$\frac{4}{\quad}$

...



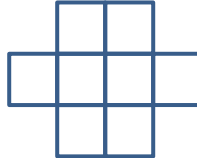
$\frac{2}{\quad}$

...



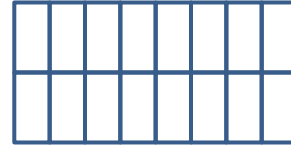
$\frac{3}{\quad}$

...



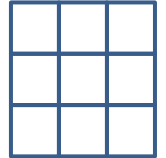
$\frac{5}{\quad}$

...



$\frac{12}{\quad}$

...




$\frac{4}{\quad}$

...



$\frac{3}{\quad}$

...




$\frac{8}{\quad}$

...




$\frac{6}{\quad}$

...



$\frac{14}{\quad}$

...



$\frac{5}{\quad}$

...

Adı :

Soyadı:

3. Sınıf
Matematik

Kesirler-2

Verilen kesirlerin okunuşlarını yazalım.

$$\frac{3}{5}$$

$$\frac{2}{6}$$

$$\frac{1}{4}$$

$$\frac{2}{3}$$

$$\frac{5}{8}$$

Beşte üç

.....

.....

.....

.....

$$\frac{2}{7}$$

$$\frac{4}{10}$$

$$\frac{3}{4}$$

$$\frac{2}{6}$$

$$\frac{6}{8}$$

.....

.....

.....

.....

.....

$$\frac{1}{9}$$

$$\frac{5}{15}$$

$$\frac{20}{100}$$

$$\frac{50}{100}$$

$$\frac{100}{100}$$

.....

.....

.....

.....

.....

Okunuşu verilen kesirleri yazalım.

Beşte üç

Dörtte iki

Altıda bir

Onda üç

Sekizde iki

Yedide beş

Dörtte bir

Üçte iki

Onda altı

Yirmide beş

Otuzda on

Altıda altı

Yüzde bir

Yüzde on

Yüzde kırk

Yüzde elli

Yüzde yirmi

Yüzde yüz