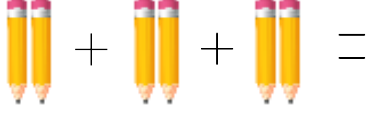


Adı : .....  
Soyadı: .....

## 2. Sınıf Matematik

### Çarpma İşlemi-1

Toplama işlemlerinin sonucunu ritmik sayma yaparak bulunuz.



$$2 + 2 + 2 = \dots\dots\dots$$

$$3 \text{ tane } 2 = \dots\dots\dots \text{ eder.}$$

$$3 \times 2 = \dots\dots\dots$$

$$3 \text{ kere } 2 = \dots\dots\dots \text{ eder.}$$

Toplama işlemlerinin sonucunu ritmik sayma yaparak bulunuz.



$$2 + 2 + 2 + 2 + 2 + 2 = \dots\dots\dots$$

$$6 \text{ tane } 2 = \dots\dots\dots \text{ eder.}$$

$$6 \times 2 = \dots\dots\dots$$

$$6 \text{ kere } 2 = \dots\dots\dots \text{ eder.}$$



$$2 + 2 + 2 + 2 + 2 = \dots\dots\dots$$

$$5 \text{ tane } 2 = \dots\dots\dots \text{ eder.}$$

$$5 \times 2 = \dots\dots\dots$$

$$5 \text{ kere } 2 = \dots\dots\dots \text{ eder.}$$

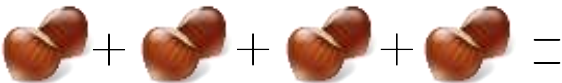


$$3 + 3 + 3 + 3 = \dots\dots\dots$$

$$4 \text{ tane } 3 = \dots\dots\dots \text{ eder.}$$

$$4 \times 3 = \dots\dots\dots$$

$$4 \text{ kere } 3 = \dots\dots\dots \text{ eder.}$$



$$2 + 2 + 2 + 2 = \dots\dots\dots$$

$$4 \text{ tane } 2 = \dots\dots\dots \text{ eder.}$$

$$4 \times 2 = \dots\dots\dots$$

$$4 \text{ kere } 2 = \dots\dots\dots \text{ eder.}$$



$$3 + 3 + 3 + 3 + 3 = \dots\dots\dots$$

$$5 \text{ tane } 3 = \dots\dots\dots \text{ eder.}$$


$$5 \times 3 = \dots\dots\dots$$

$$5 \text{ kere } 3 = \dots\dots\dots \text{ eder.}$$

Adı : .....  
Soyadı: .....

## 2. Sınıf Matematik

### Çarpma İşlemi-1



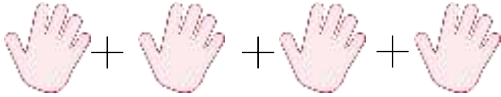
$$4 + 4 + 4 = \dots\dots\dots$$

$$3 \times 4 = \dots\dots\dots$$



$$4 + 4 + 4 + 4 + 4 + 4 = \dots\dots\dots$$

$$6 \times 4 = \dots\dots\dots$$




$$5 + 5 + 5 + 5 = \dots\dots\dots$$

$$4 \times 5 = \dots\dots\dots$$




$$2 + 2 + 2 + 2 + 2 + 2 + 2 = \dots\dots\dots$$

$$7 \times 2 = \dots\dots\dots$$



$$5 + 5 + 5 + 5 + 5 = \dots\dots\dots$$

$$5 \times 5 = \dots\dots\dots$$



$$3 + 3 + 3 + 3 + 3 + 3 = \dots\dots\dots$$

$$6 \times 3 = \dots\dots\dots$$