

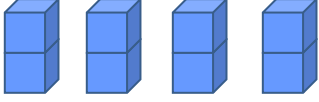
Adı :

Soyadı:

2. Sınıf Matematik

Çarpma İşlemi-2

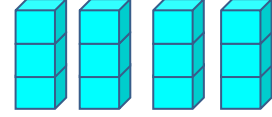
Kaç tane nesne olduğunu örnekteki gibi hesaplayınız.



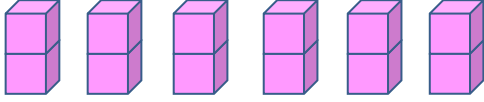
4 tane 2 = 8 eder.

$$4 \times 2 = 8$$

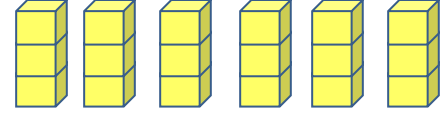
Kaç tane nesne olduğunu örnekteki gibi hesaplayınız.



.....
.....



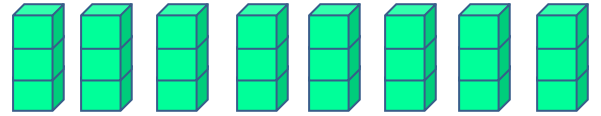
.....
.....



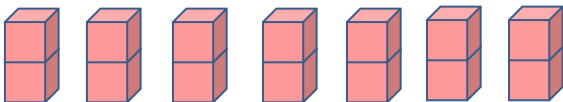
.....
.....



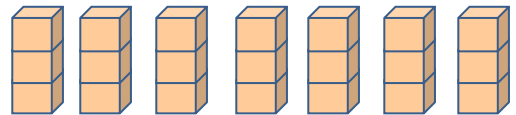
.....
.....



.....
.....



.....
.....



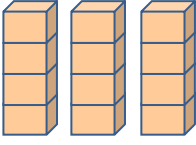
.....
.....

Adı :

Soyadı:

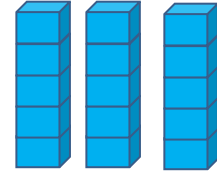
2. Sınıf Matematik

Çarpma İşlemi-2

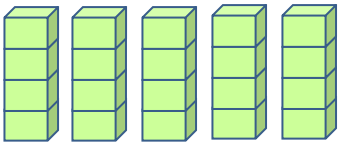


3 tane 4 = 12 eder.

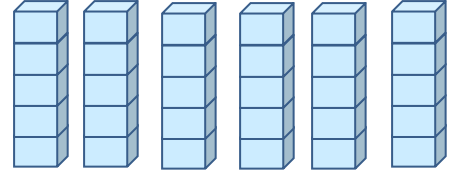
$$3 \times 4 = 12$$



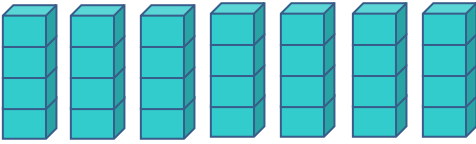
.....
.....



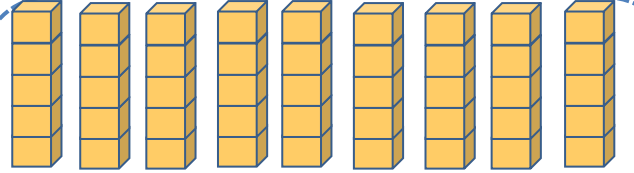
.....
.....



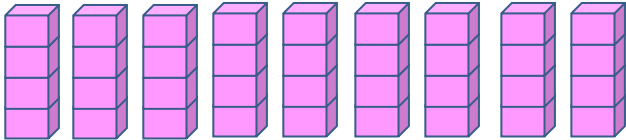
.....
.....



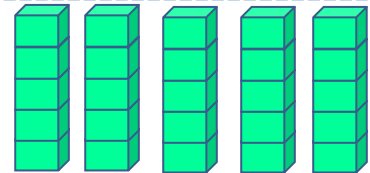
.....
.....



.....
.....



.....
.....



.....
.....