



Adı Soyadı :

Numarası :

Konu: Zihinden Çıkaralım

Aşağıdaki çıkarma işlemlerini zihinden yapınız.

$40 - 10 =$

$40 - 10 =$

$40 - 10 =$

$40 - 10 =$

$50 - 10 =$

$20 - 10 =$

$60 - 20 =$

$70 - 20 =$

$40 - 20 =$

$90 - 30 =$

$40 - 30 =$

$80 - 30 =$

$70 - 40 =$

$60 - 40 =$

$40 - 30 =$

$80 - 50 =$

$60 - 50 =$

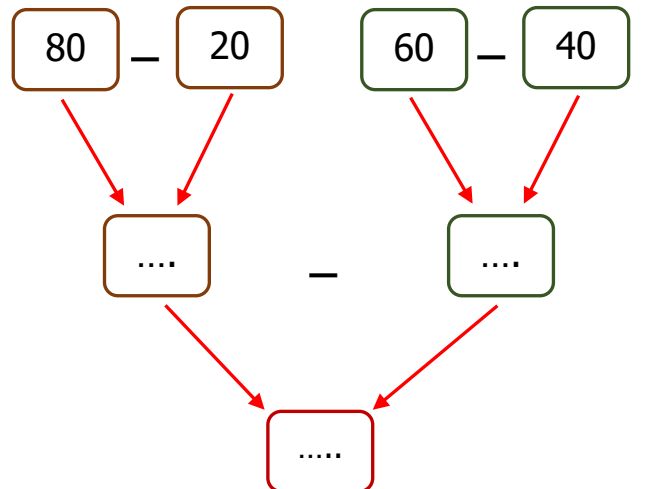
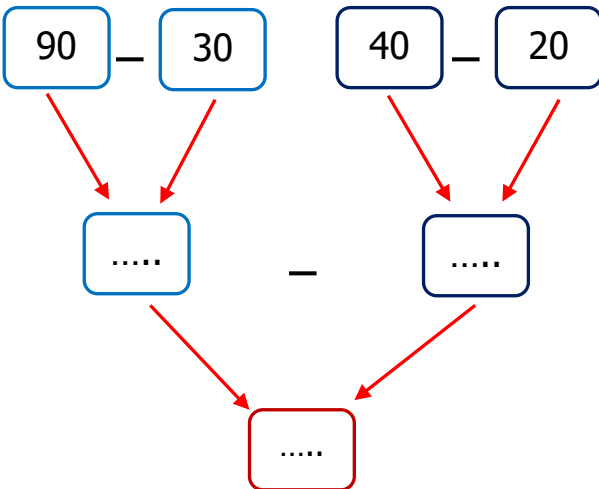
$70 - 50 =$

$70 - 60 =$

$90 - 80 =$

$80 - 70 =$

Aşağıdaki çıkarma işlemlerini zihinden yapınız.



Aşağıdaki çıkarma işlemlerini zihinden yapalım.

$$\begin{array}{r} 70 \\ - 30 \\ \hline \end{array}$$

$$\begin{array}{r} 50 \\ - 20 \\ \hline \end{array}$$

$$\begin{array}{r} 80 \\ - 40 \\ \hline \end{array}$$

$$\begin{array}{r} 60 \\ - 10 \\ \hline \end{array}$$

$$\begin{array}{r} 70 \\ - 40 \\ \hline \end{array}$$

$$\begin{array}{r} 90 \\ - 50 \\ \hline \end{array}$$

$$\begin{array}{r} 60 \\ - 50 \\ \hline \end{array}$$

$$\begin{array}{r} 70 \\ - 50 \\ \hline \end{array}$$

$$\begin{array}{r} 80 \\ - 50 \\ \hline \end{array}$$

$$\begin{array}{r} 50 \\ - 50 \\ \hline \end{array}$$

$$\begin{array}{r} 90 \\ - 40 \\ \hline \end{array}$$


$$\begin{array}{r} 80 \\ - 30 \\ \hline \end{array}$$

$$\begin{array}{r} 70 \\ - 20 \\ \hline \end{array}$$

$$\begin{array}{r} 60 \\ - 10 \\ \hline \end{array}$$

$$\begin{array}{r} 80 \\ - 10 \\ \hline \end{array}$$

Aşağıdaki çıkarma işlemlerini ok yönünde yapınız.



Aşağıdaki çıkarma işlemlerini zihinden yapınız.

$$90$$

$$\begin{array}{r} \text{.....} \\ \hline \end{array} - \begin{array}{r} \text{.....} \\ \hline \end{array} = \boxed{?}$$

$$40$$

$$\begin{array}{r} \text{.....} \\ \hline \end{array} - \begin{array}{r} \text{.....} \\ \hline \end{array} = \boxed{?}$$

$$60$$

$$\begin{array}{r} \text{.....} \\ \hline \end{array} - \begin{array}{r} \text{.....} \\ \hline \end{array} = \boxed{?}$$