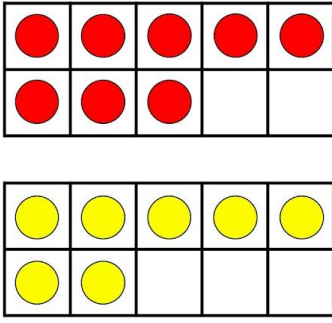
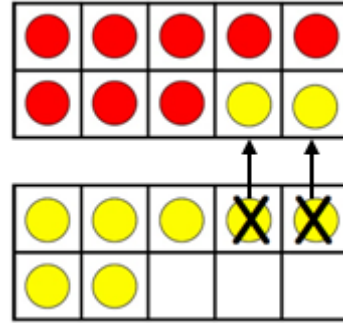


1. SINIF ZİHİNDEN TOPLAMA ETKİNLİĞİ - 1

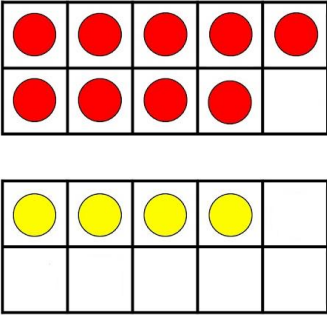
❖ Büyük toplananı 10 yap, sonucu hızlıca bul.



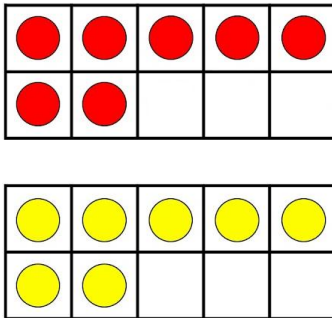
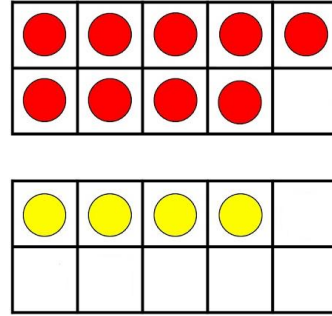
$$\begin{array}{r} 8 \\ + 7 \\ \hline \end{array}$$



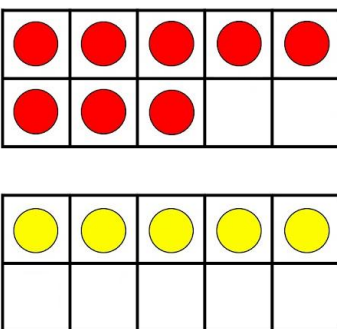
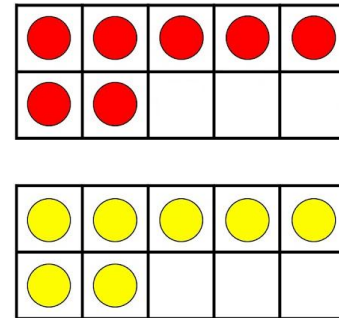
$$\begin{array}{r} 10 \\ + 5 \\ \hline 15 \end{array}$$



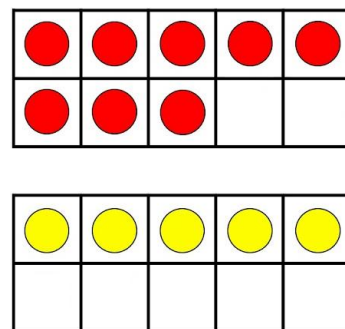
$$\begin{array}{r} 9 \\ + 4 \\ \hline \end{array}$$



$$\begin{array}{r} 7 \\ + 7 \\ \hline \end{array}$$




$$\begin{array}{r} 8 \\ + 5 \\ \hline \end{array}$$



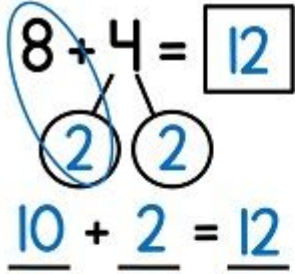
1. SINIF ZİHİNDEN TOPLAMA ETKİNLİĞİ - 1

❖ Toplamı 10 olan sayıları boyayınız.



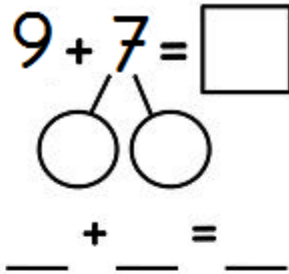
❖ Toplama işlemlerini örnekteki gibi zihinden yapınız.

$$8 + 4 = \boxed{12}$$



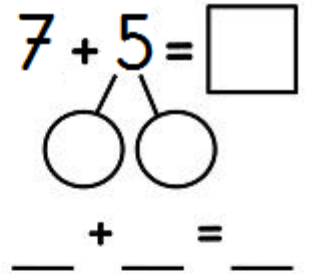
$$\underline{10} + \underline{2} = \underline{12}$$

$$9 + 7 = \square$$



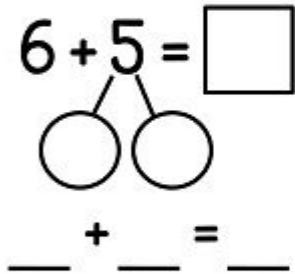
$$\underline{\quad} + \underline{\quad} = \underline{\quad}$$

$$7 + 5 = \square$$



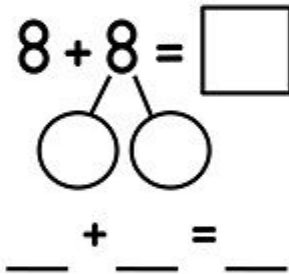
$$\underline{\quad} + \underline{\quad} = \underline{\quad}$$

$$6 + 5 = \square$$



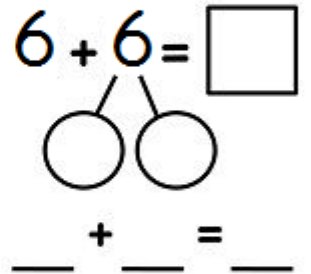
$$\underline{\quad} + \underline{\quad} = \underline{\quad}$$

$$8 + 8 = \square$$



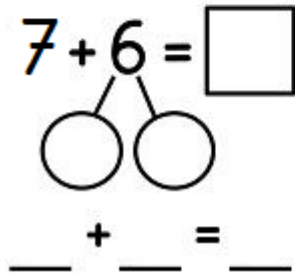
$$\underline{\quad} + \underline{\quad} = \underline{\quad}$$

$$6 + 6 = \square$$



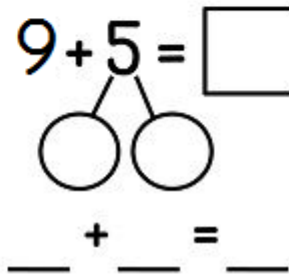
$$\underline{\quad} + \underline{\quad} = \underline{\quad}$$

$$7 + 6 = \square$$



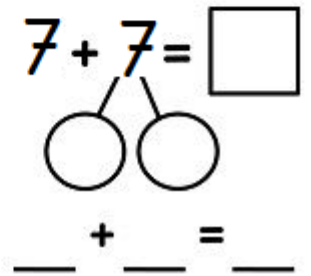
$$\underline{\quad} + \underline{\quad} = \underline{\quad}$$

$$9 + 5 = \square$$



$$\underline{\quad} + \underline{\quad} = \underline{\quad}$$

$$7 + 7 = \square$$



$$\underline{\quad} + \underline{\quad} = \underline{\quad}$$