

1. SINIF ZİHİNDEN TOPLAMA ETKİNLİĞİ - 2

❖ Sonucu 10 olan işlemlerin kutularını boyayınız.

$6 + 3$

$3 + 7$

$1 + 9$

$5 + 4$

$8 + 2$

$4 + 4$

$0 + 8$

$6 + 1$

$4 + 6$

$3 + 3$

$5 + 2$

$0 + 10$







$2 + 2$

$7 + 3$

$2 + 8$

$5 + 5$

❖ Üçlü lambalardan toplamı 10 edenleri boyayınız.



1. SINIF ZİHİNDEN TOPLAMA ETKİNLİĞİ - 2

❖ Toplama işlemlerini örnekteki gibi zihinden yapınız.

$8 + 5 = 13$ $10 + 3 = 13$	$6 + 5 =$	$9 + 2 =$
----------------------------	-----------	-----------

$7 + 4 =$	$8 + 3 =$	$6 + 6 =$
-----------	-----------	-----------

$9 + 8 =$	$7 + 6 =$	$8 + 7 =$
-----------	-----------	-----------