

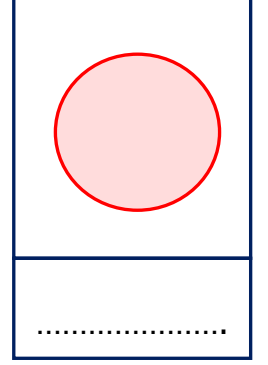


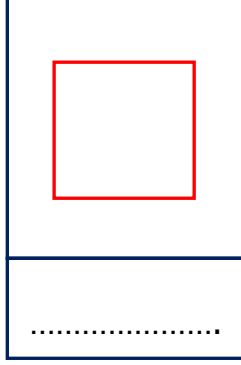



Adı Soyadı :

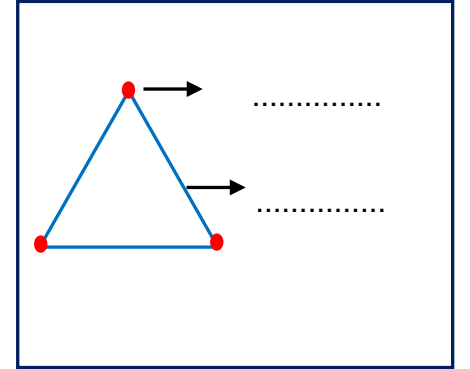
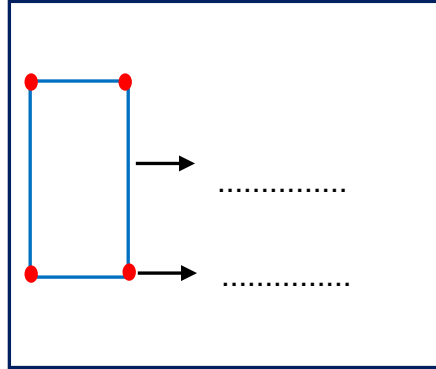
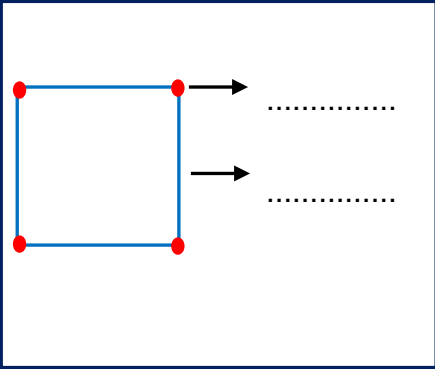
Numarası :

Konu: Geometrik Şekiller Sınıflandırılım

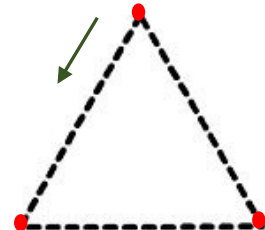
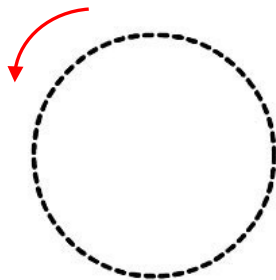
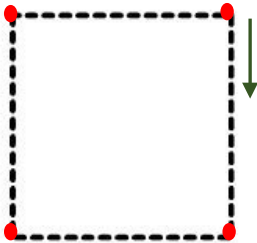
Aşağıdaki kutularda bulunan geometrik şekillerin adlarını yazalım.



Aşağıdaki geometrik şekillerin oklarla gösterilmiş kısımlarını yazınız.



Aşağıda noktalı verilen şekilleri ok yönünde başlayarak çizelim.






Özellikleri verilen geometrik şekilleri bulalım ve eşleştirelim.

4 eş kenarı ve dört eş köşesi var.

3 kenarı ve 3 köşesi var.

Karşılıklı kenarları eşit
4 kenarı 4 köşesi var.



Kenarı ve köşesi olmayan içi dolu olan şekil.

Kenarı ve köşesi olmayan şekil.

Aşağıdaki görselde geometrik şekillerin kaçar tane olduklarını yazınız.

Kare: tane

Dikdörtgen:tane

Üçgen: tane

Çember: tane

Daire: tane

