

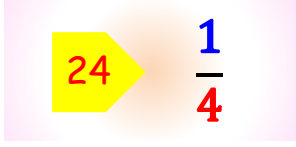
Adı :

Soyadı:

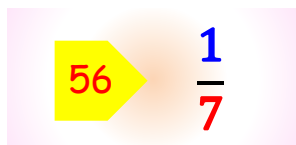
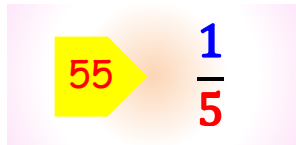
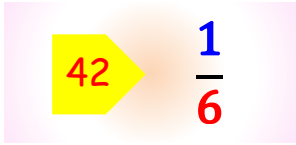
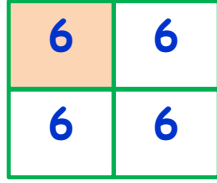
3. Sınıf
Matematik

Kesirler-8

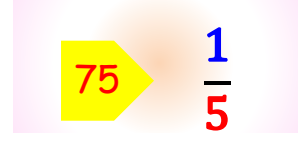
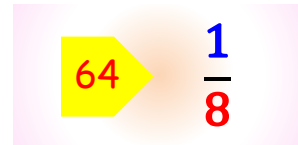
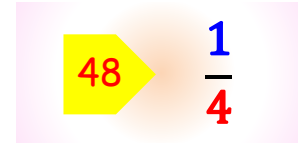
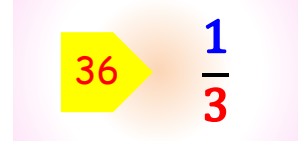
Verilen kesrin birim miktarını bulunuz. Örnekteki gibi şekille çiziniz.



$$\begin{array}{r} 24 \\ -24 \\ \hline 0 \end{array}$$



Verilen kesrin birim miktarını bulunuz. Örnekteki gibi şekille çiziniz.



Adı :

Soyadı:

3. Sınıf Matematik

Kesirler-8

12 çiçeğin $\frac{1}{3}$ ' i kaç
çiçek eder?

12 öğrencinin $\frac{1}{6}$ ' i kaç
öğrenci eder?

42 TL paranın $\frac{1}{7}$ ' i kaç
TL eder?

84 kitabın $\frac{1}{4}$ ' i kaç
kitap eder?

72 kurabiyenin $\frac{1}{6}$ ' i kaç
kurabiye eder?

95 cevizin $\frac{1}{5}$ ' i kaç
ceviz eder?

88 TL paranın $\frac{1}{8}$ ' i kaç
TL eder?

