



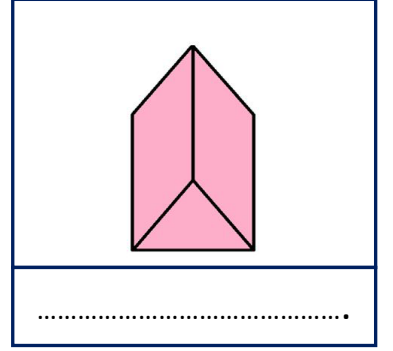

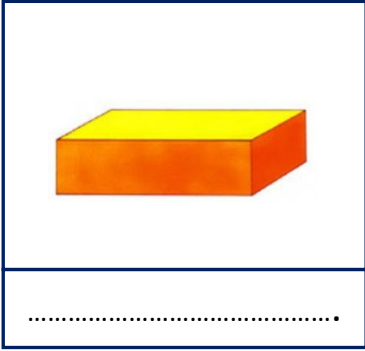
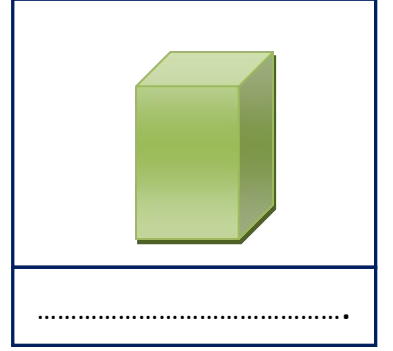

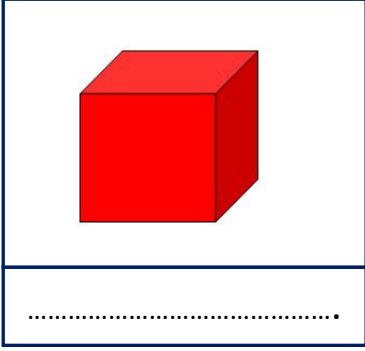
Adı Soyadı : .....

Numarası : .....

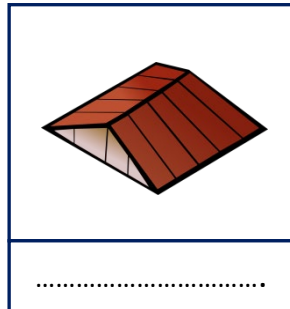


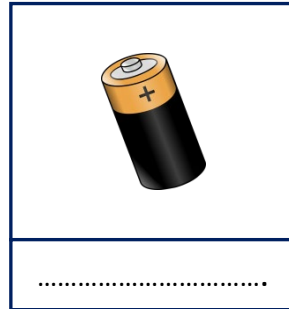
Konu: Geometrik Cisimleri Tanıyalım

### Geometrik Cisimleri Tanıyalım

Aşağıdaki geometrik cisimlerin adlarını yazalım.

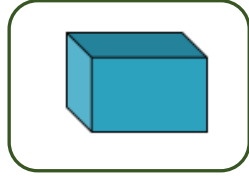


Aşağıdaki nesnelerin hangi geometrik cisme benzediğini altlarına yazalım.



1 Yandaki model aşağıdakilerden hangisine örnektir?


- A) Küp
- B) Dikdörtgen prizma
- C) Kare prizma




2 Aşağıdaki nesnelere hangisi benzediği geometrik cisimle yanlış eşleştirilmiştir?



3 Aşağıdakilerden hangisi silindire örnektir?



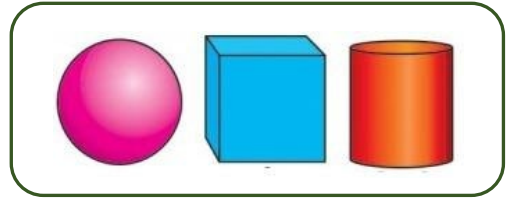
4 Aşağıdaki nesnelere hangisi diğerlerinden farklıdır?



5 Aşağıdaki çadırlardan hangisi üçgen prizmaya örnektir?




6



Yukarıda hangi geometrik cisim kullanılmamıştır?

- A) Küre
- B) Küp
- C) Silindir

7 Aşağıdaki görsellerden hangisi küreye benzemektedir?



8 Aşağıdakilerden hangisi kare prizmaya örnek olamaz?

