

Adı : .....

Soyadı: .....

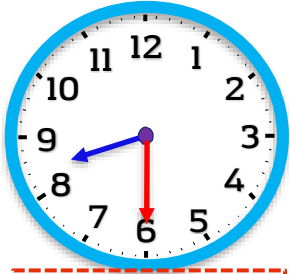


3. Sınıf  
Matematik

Zaman Ölçme-1

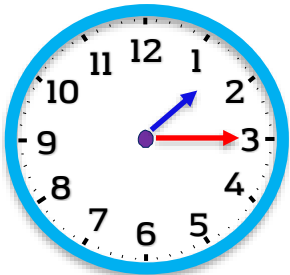
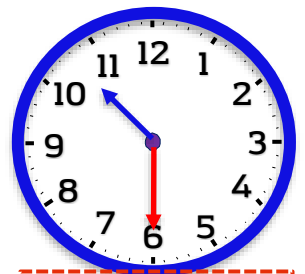
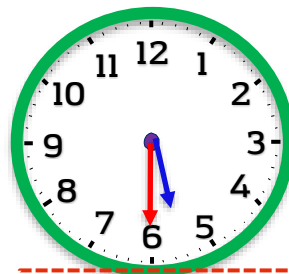
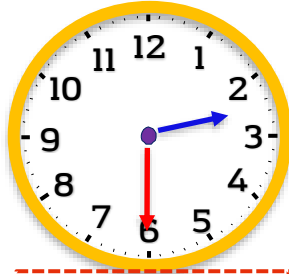
Aşağıdaki saatlerin kaçı gösterdiğini yazınız.



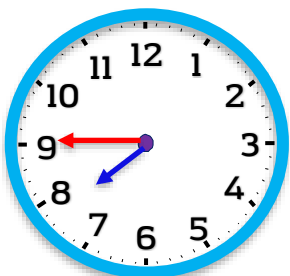
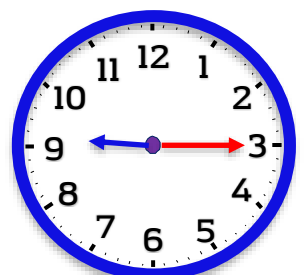
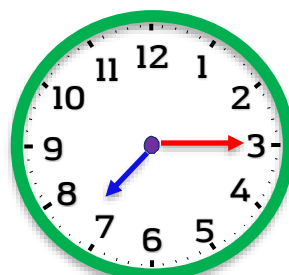
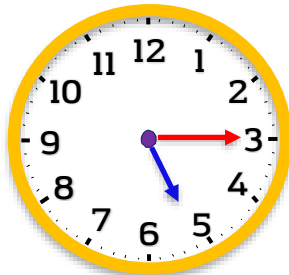
Tam 5



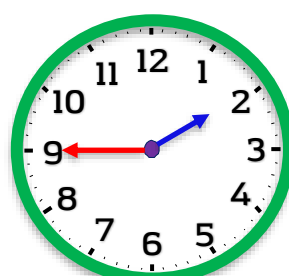
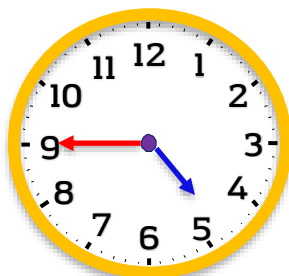
8 buçuk



1'i çeyrek geçiyor.



8'e çeyrek var.



Adı : .....

Soyadı: .....

3. Sınıf  
Matematik

Zaman Ölçme-1

Aşağıdaki saatlerin kaçı gösterdiğini yazınız.

