

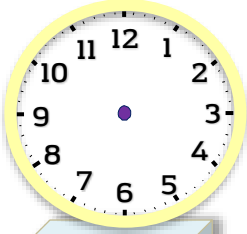
Adı : .....

Soyadı: .....

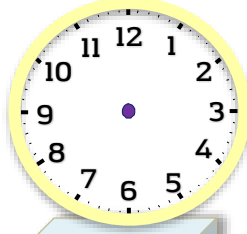
3. Sınıf  
Matematik

Zaman Ölçme-3

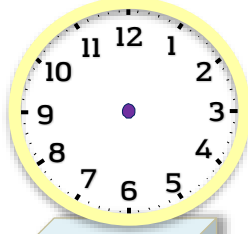
Aşağıdaki saatlerin yelkovan ve akreplerini çiziniz.



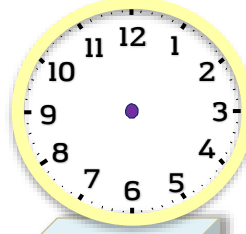
02:00



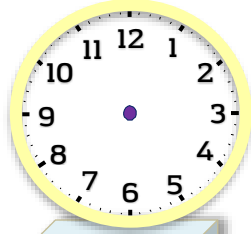
03:20



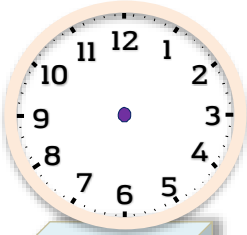
05:55



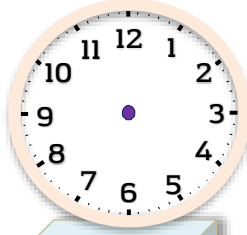
06:35



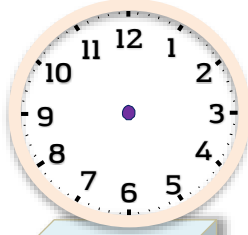
08:25



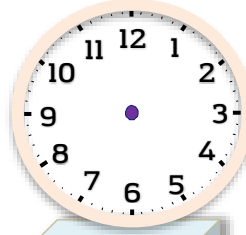
10:05



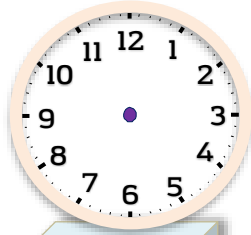
09:55



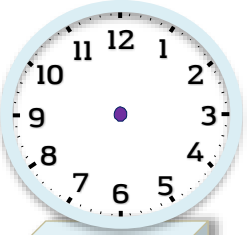
07:40



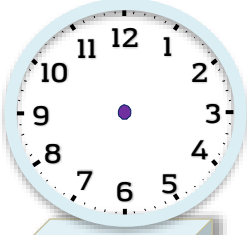
08:30



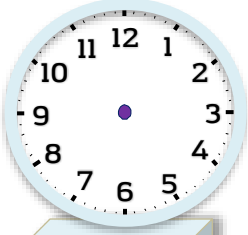
03:40



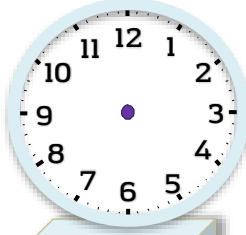
11:05



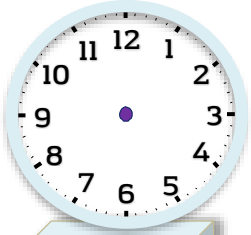
12:20



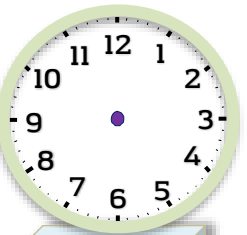
04:30



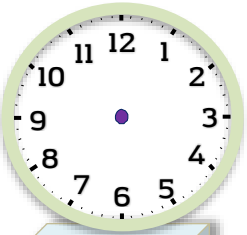
04:20



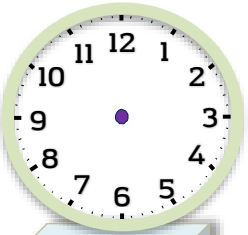
10:25



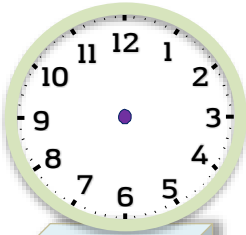
08:25



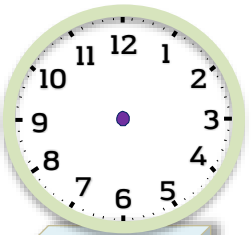
10:15



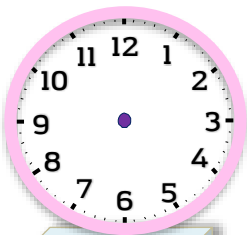
09:35



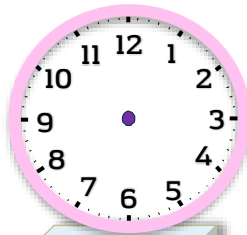
02:50



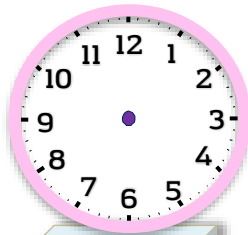
11:55



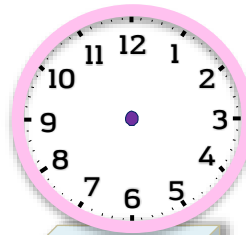
01:40



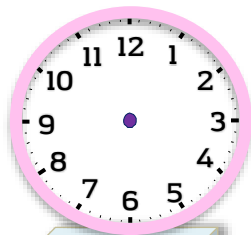
12:50



03:05



12:35



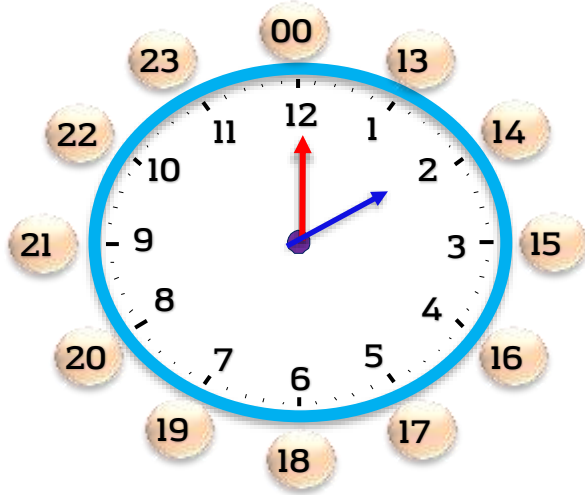
03:15

Adı : .....

Soyadı: .....

### 3. Sınıf Matematik

### Zaman Ölçme-3



Öğleden Önce 02 . 00

Öğleden Sonra 14 . 00



Öğleden Önce .....

Öğleden Sonra .....



Öğleden Önce .....

Öğleden Sonra .....



Öğleden Önce .....

Öğleden Sonra .....



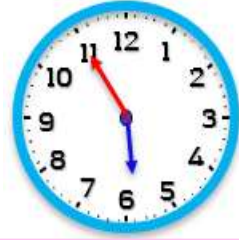
Öğleden Önce .....

Öğleden Sonra .....



Öğleden Önce .....

Öğleden Sonra .....



Öğleden Önce .....

Öğleden Sonra .....



Öğleden Önce .....

Öğleden Sonra .....



Öğleden Önce .....

Öğleden Sonra .....



Öğleden Önce .....

Öğleden Sonra .....