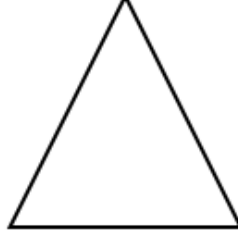

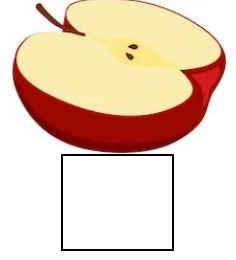





# 1. SINIF BÜTÜN - YARIM ETKİNLİKLERİ - 1

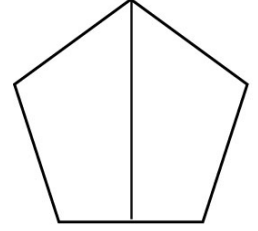
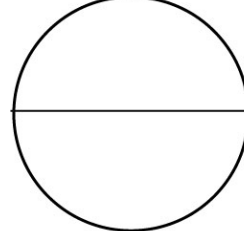


Aşağıdaki şekillerden her birinin **bütünü** boyayınız.




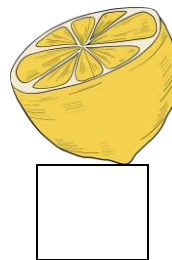


Aşağıdaki meyvelerden **bütün** olanların kutularını boyayınız.



Aşağıdaki şekillerden her birinin **yarısını** boyayınız.



Aşağıdaki meyvelerden **yarım** olanların kutularını boyayınız.



Aşağıdaki yarımaları eşleştirerek bütüne tamamlayınız.



Aşağıdaki varlıkların altına bütün veya yarım yazınız.