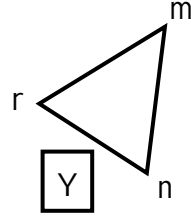
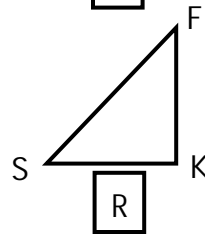
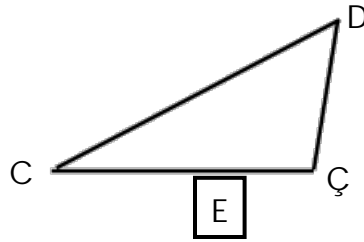
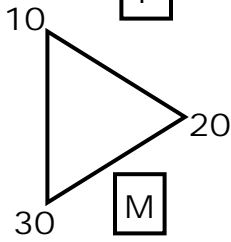
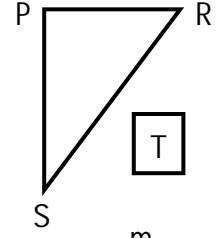
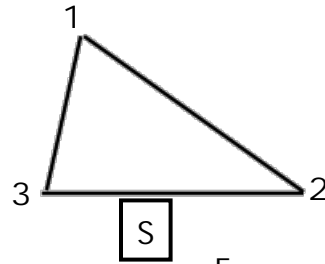
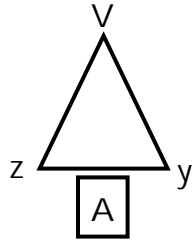
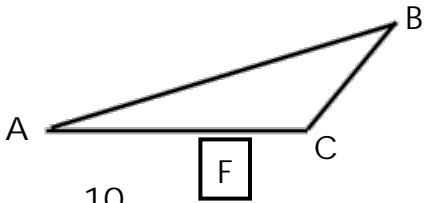
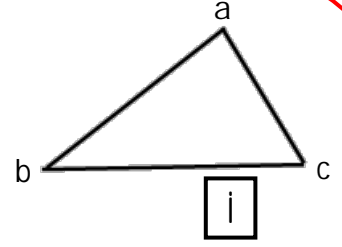
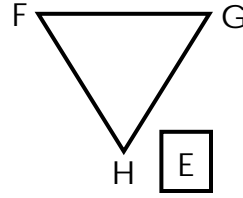
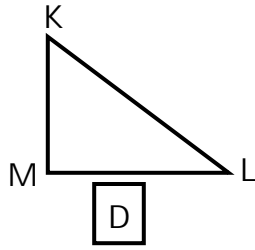
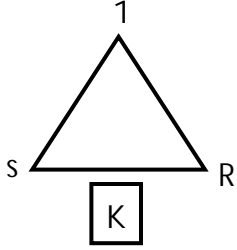




GEOMETRİK ŞEKİLLER

a Aşağıdaki üçgenlerden hangilerinin köşeleri doğru isimlendirilmiştir? Doğru isimlendirilenlerin harflerini sırayla kutulara yazarak şifreyi bulalım.



ŞİFRE :

a Aşağıdaki üçgenlerin köşelerini isimlendirelim.

