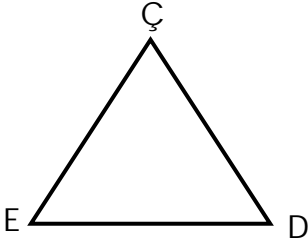




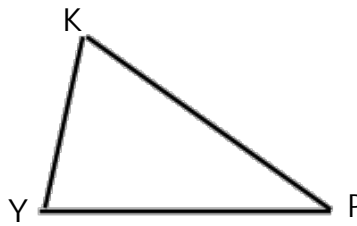
GEOMETRİK ŞEKİLLER

a Aşağıdaki şekillerin ve kenarlarının isimlerini örnekteki gibi yazalım.



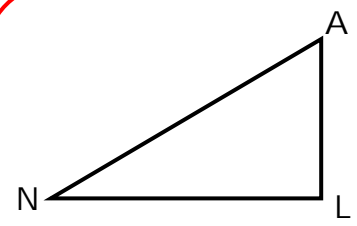
ÇDE üçgeni

- 1.) ÇD veya e kenarı
- 2.) DE veya ç kenarı
- 3.) EÇ veya d kenarı



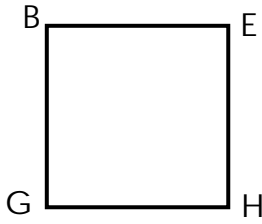
..... üçgeni

- 1.) veya kenarı
- 2.) veya kenarı
- 3.) veya kenarı



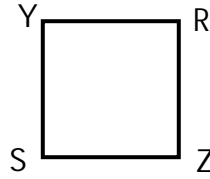
..... üçgeni

- 1.) veya kenarı
- 2.) veya kenarı
- 3.) veya kenarı



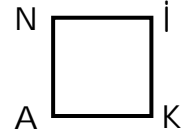
BGHE karesi

- 1.) BE kenarı
- 2.) HE kenarı
- 3.) GH kenarı
- 4.) BG kenarı




..... karesi

- 1.) kenarı
- 2.) kenarı
- 3.) kenarı
- 4.) kenarı



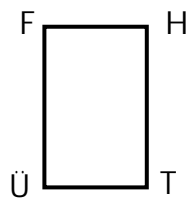
..... karesi

- 1.) kenarı
- 2.) kenarı
- 3.) kenarı
- 4.) kenarı



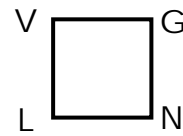
MŞÖC dikdörtgeni

- 1.) ÖŞ kenarı
- 2.) ŞM kenarı
- 3.) CÖ kenarı
- 4.) MC kenarı



..... dikdörtgeni

- 1.) kenarı
- 2.) kenarı
- 3.) kenarı
- 4.) kenarı



..... dikdörtgeni

- 1.) kenarı
- 2.) kenarı
- 3.) kenarı
- 4.) kenarı