
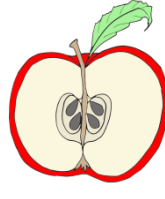
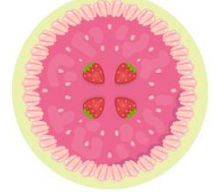


1. SINIF BÜTÜN - YARIM ETKİNLİKLERİ - 2

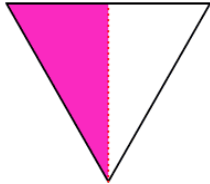
Aşağıdaki varlıkların altına **bütün** veya **yarım** yazınız.


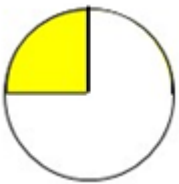
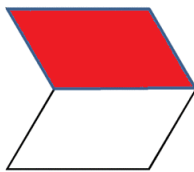




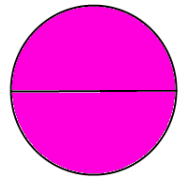


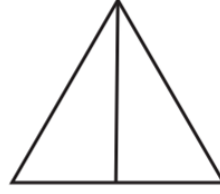
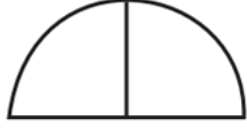
Boyalı alan **yarım** ise **gülen** yüzü, değilse **üzgün** yüzü boyayınız.



✚ Aşağıdaki şekillerden her birinin **yarısını** boyayınız.



✚ Aşağıdaki **yarımları** eşleştirerek **bütüne** tamamlayınız.




✚ Aşağıdaki **boşlukları** uygun ifadelerle **doldurunuz.**



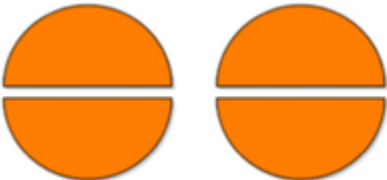
1 bütün yarım eder.



2 yarım bütün eder.



2 bütün yarım eder.



4 yarım bütün eder.