

Adı :

Soyadı:

3. Sınıf
Matematik

Tartma-2

Verilen nesnelerin kütlelerini yazınız.



125 g



375 g



75 g



.....



220 g



.....




50 g



.....



60 g



.....



3 g



.....




12 g



.....



15 g



.....




180 g



.....



25 g



.....

Adı :
Soyadı :

3. Sınıf Matematik

Tartma-2



.....



60 kg



.....



35 kg



.....



8 kg



.....



84 kg



.....



80 kg



.....



88 kg



65 kg



.....



62 kg



.....



140 g



.....



60 g



.....