

# 1. SINIF SAAT ETKİNLİKLERİ - 1

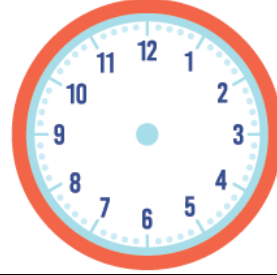
✚ Saatlerin kaçı gösterdiğini altlarına örnekteki gibi yazınız.



→ Saat on bir



✚ Okunuşları verilen saatlerin akrep ve yelkovanlarını çiziniz.



→ Saat beş

→ Saat dokuz

→ Saat üç

→ Saat sekiz



→ Saat altı





→ Saat on

→ Saat yedi

→ Saat on iki

# 1. SINIF SAAT ETKİNLİKLERİ - 1

✚ Saatlerin kaçı gösterdiğini altlarına örnekteki gibi yazınız.







→ Sekiz buçuk

→

→

→



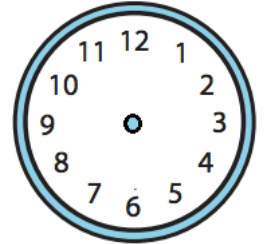
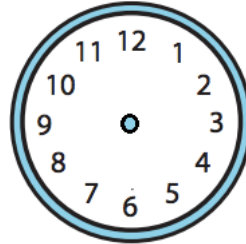
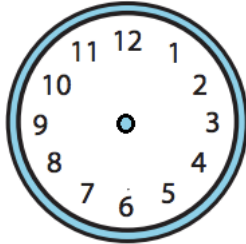
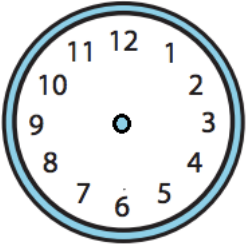
→

→

→

→

✚ Okunuşları verilen saatlerin akrep ve yelkovanlarını çiziniz.

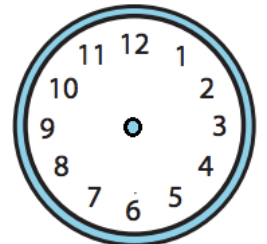
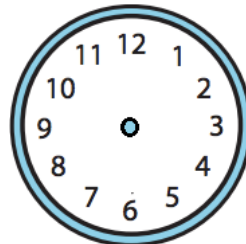
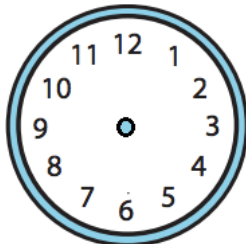
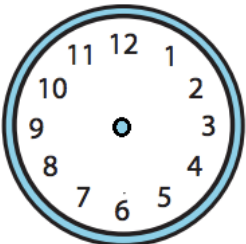


→ Bir buçuk

→ Yedi buçuk

→ On bir buçuk

→ Sekiz buçuk



→ İki buçuk

→ Altı buçuk

→ On iki buçuk

→ Dört buçuk