

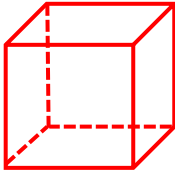
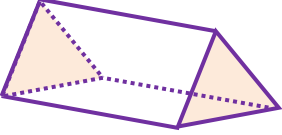
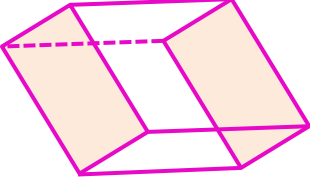
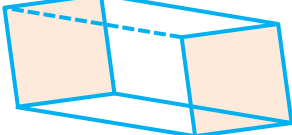

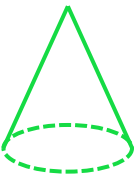
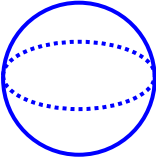
Adı :

Soyadı:

3. Sınıf
Matematik

Geometrik Şekiller ve
Cisimler-2

Geometrik cisimlerle ilgili tabloyu doldurunuz.

| Geometrik Cisim | Adı | Köşe Sayısı | Ayırıt Sayısı | Yüz Sayısı |
|---|-----|-------------|---------------|------------|
|  | | | | |
|  | | | | |
|  | | | | |
|  | | | | |
|  | | | | |
|  | | | | |
|  | | | | |

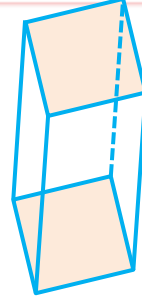
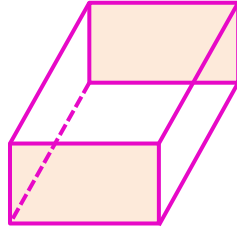
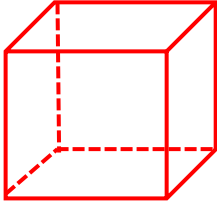
Adı :

Soyadı:

3. Sınıf
Matematik

Geometrik Şekiller ve
Cisimler-2

Aşağıdaki geometrik şekillerin benzer ve farklı yönlerini yazalım.

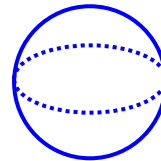
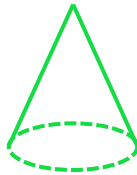


Benzer Yönleri

- 1-
- 2-
- 3-

Farklı Yönleri

- 1-
- 2-
- 3-



Benzer Yönleri

- 1-
- 2-

Farklı Yönleri

- 1-
- 2-