




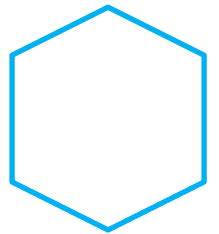

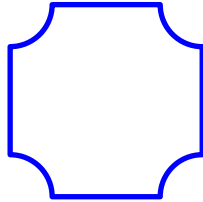
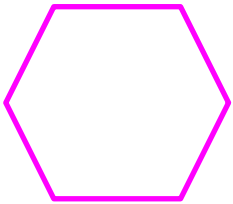



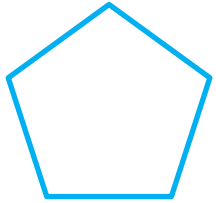
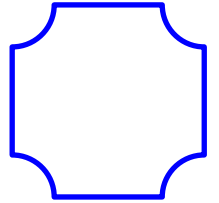

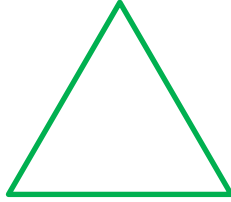



Adı :
Soyadı:

2. Sınıf
Matematik

Kesirler-2

Aşağıdaki şekilleri tam ortadan iki eş parçaya bölünüz ve yarısını boyayınız.

Aşağıdaki şekilleri dört eş parçaya bölünüz ve çeyreğini boyayınız.




Adı :
Soyadı:


2. Sınıf Matematik

Kesirler-2


Ne kadarının boyalı olduğunu yazınız.



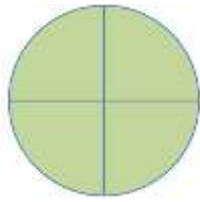
.....



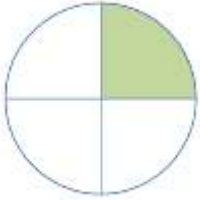
.....



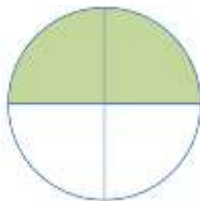
.....



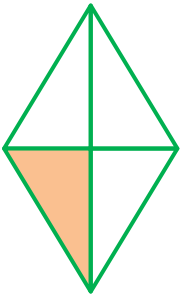
.....



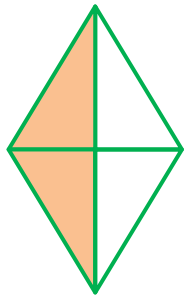
.....



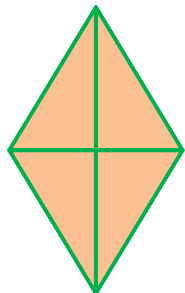
.....



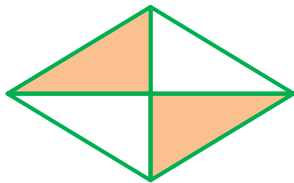
.....



.....



.....



.....

Ne kadarının boyalı olduğunu yazınız.



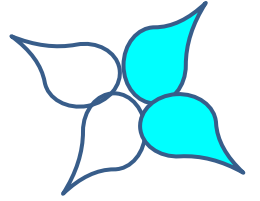
.....




.....



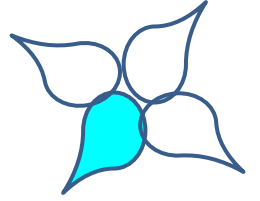
.....



.....




.....



.....




.....



.....



.....



.....